

This file was downloaded from the American Curriculum website



الملف Worksheet about Earth systems

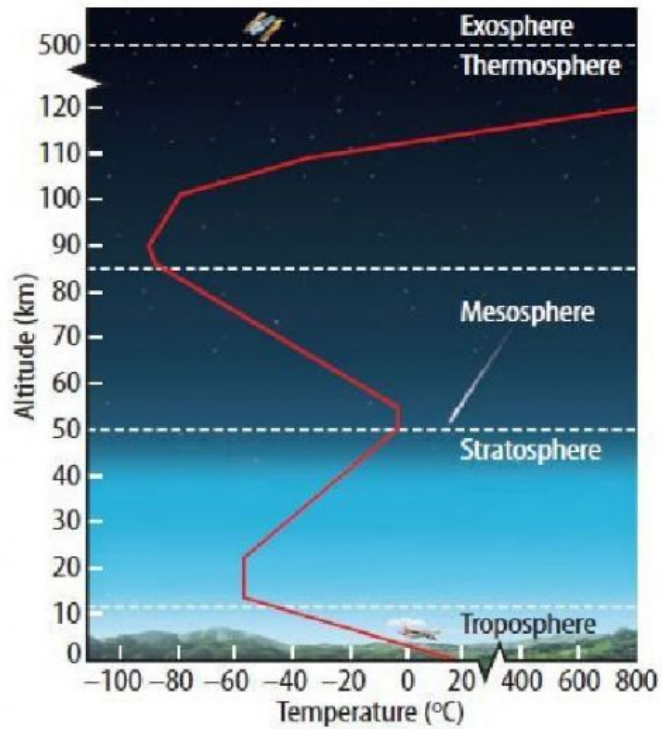
[Almanahj Website](#) → [American curriculum](#) → [8th Grade](#) → [Geology](#) → [Term 1](#) → [The file](#)

More files for 8th Grade , Subject Geology , Term 1

<a href="#">Worksheet about Earth layers</a>	1
<a href="#">Worksheet about Earths relief</a>	2
<a href="#">Worksheet about earth orbit</a>	3
<a href="#">Worksheet about Analyzing the rock and fossil records</a>	4
<a href="#">Worksheet about Geology</a>	5

1. Which of the following layers of Earth's atmosphere has the narrowest temperature range?

[Need a Hint?](#)



- A.  troposphere
- B.  stratosphere
- C.  mesosphere
- D.  thermosphere

2. Which of the following is NOT a trace gas in Earth's atmosphere?

[Need a Hint?](#)

- A.  argon
- B.  carbon dioxide
- C.  ozone
- D.  nitrogen


3. Most of the hydrosphere is in what form?

[Need a Hint?](#)

- A.  ocean water
  - B.  ice
  - C.  freshwater
  - D.  groundwater
- 

4. The layer of the geosphere immediately below the crust is called what?

[Need a Hint?](#)




- A.  the hydrosphere
  - B.  the mantle
  - C.  the outer core
  - D.  the inner core
- 

5. Scientists classify rocks mainly according to which feature?

[Need a Hint?](#)

- A.  their color
  - B.  their hardness
  - C.  how they form
  - D.  where they are found
- 

 This is the end of the test. When you have completed all the questions and reviewed your answers, press the button below to grade the test.

Grade the Test

Please read our [Terms of Use](#) and [Privacy Notice](#) before you explore our Web site. To report a technical problem with this Web site, please contact [Technical Support](#).

