

This file was downloaded from the American Curriculum website



Test Midterm Revision الملف

[Almanahj Website](#) → [American curriculum](#) → [3rd Grade](#) → [Math](#) → [Term 1](#) → [The file](#)

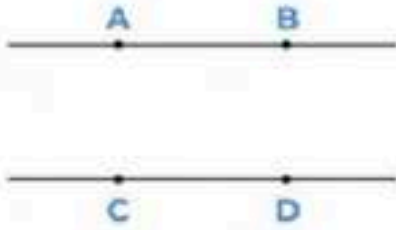
More files for 3rd Grade , Subject Math , Term 1

Worksheet about days and months	1
Worksheet about Solving subtraction word problems	2
Math Area and Perimeter review sheet	3
Worksheet about 3D shapes	4
Revision Midterm Test	5
Worksheet about Brandi's word problems	6
Worksheet about Area polygon	7

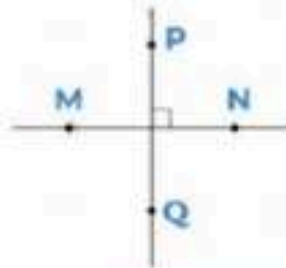
REVISION MIDTERM TEST – SEMESTER II

MATH – GRADE 4

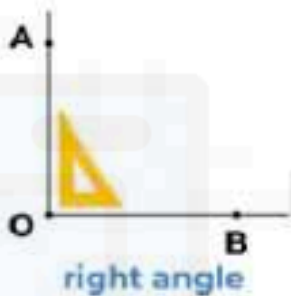
*Từ vựng



Line AB is **parallel** to line CD.



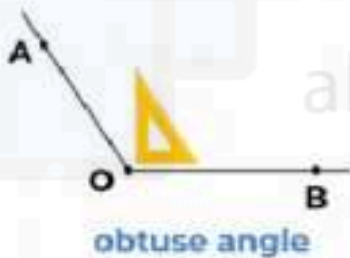
Line MN is **perpendicular** to line PQ.



right angle



acute angle



obtuse angle



straight angle

*Câu trúc:

20 is **divisible** by 2 and 5 (20 chia hết cho 2 và 5)

31 is **not divisible** by 3 (31 không chia hết cho 3)

Even numbers: Số chẵn;

Odd numbers: số lẻ

SECTION 1: Fill in the blanks with the correct word

1. Line AD isto line AB
2. Line CD isto line AD and line CB
3. Line CB isto line DA
4. Line AB is parallel to line
5. Line is parallel to line AD
6. Line DC is perpendicular to line and line



SECTION 2 – Fill in the blanks

1. Twolines never meet.
2. Two.....lines meet at a right angle.
3. An angle is smaller than a right angle
4. An.....angle is bigger than a right angle, but smaller than a straight angle.
5. Aangle is two times as big as a right angle
6. A angle is half of a straight angle

SECTION 3. Choose the correct answer.

1. What angle is this?



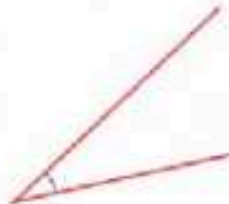
- A. Right B. Acute C. Obtuse D. Straight

2. What angle is this?



- A. Right B. Acute C. Obtuse D. Straight

3. What angle is this?



- A. Right B. Acute C. Obtuse D. Straight

4. What angle is this?



- A. Right B. Acute C. Obtuse D. Straight

5. Which is smallest angle?

- A. Right B. Acute C. Obtuse D. Straight

6. Which is biggest (largest) angle?

- A. Right B. Acute C. Obtuse D. Straight

7. Which angles are smaller than an obtuse angle?

- A. Straight B. Acute and right C. Acute and straight

8. Which angles are bigger than a right angle?

- A. Straight and acute B. Obtuse and acute C. Obtuse and straight

FROM

SECTION 4 – Fill in the blanks with “divisible” or “not divisible”

- 1) 621 is by 2
- 2) 680 is by 5
- 3) 108 isby 3
- 4) 246 isby 9
- 5) 375 isby 3 butby 9
- 6) 120 isby 5 andby 2