

This file was downloaded from the American Curriculum website




numbers digit 5 about Worksheet الملف

[Almanahj Website](#) → [American curriculum](#) → [4th Grade](#) → [Math](#) → [Term 1](#) → [The file](#)

More files for 4th Grade , Subject Math , Term 1

<a href="#">Worksheet about Divisibility</a>	1
<a href="#">Worksheet about Triangles</a>	2
<a href="#">Worksheet Mental Maths</a>	3
<a href="#">Worksheet about Review math for mid term 2</a>	4
<a href="#">Worksheet about Math Revision</a>	5
<a href="#">Worksheet about adding numbers</a>	6
<a href="#">Worksheet about Complete patterns</a>	7

- 3 These are the heights of some mountains. The list is in alphabetical order. Write the mountains in order of height. Start with the highest mountain.



Mountain	Height
Aconcagua	6960 m
Chappal Waddi	2409 m
Cook	3766 m
Everest	8848 m
K2	8611 m
Kilimanjaro	5893 m
Lenin Peak	7134 m
McKinley	6914 m

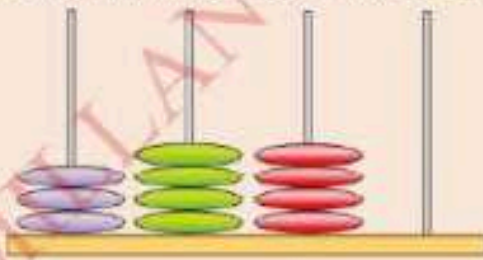
### Assessment

Look at these numbers.

3482 3502 3414 3440 3424

- 1 Which number is three thousand, four hundred and fourteen?

- 2 Which number does this abacus show?



- 3 Which number is  $3000 + 400 + 80 + 2$ ?

- 4 Write the missing number?  $3490 < \text{$

2 Write in words the value of the red digit.

- a) 23 **1**43
- b) **4**0911
- c) 3**3**549
- d) 810**0**5
- e) **9**9911
- f) 200**4**8
- g) **6**1935
- h) 31**9**94

3 In each number, circle the digit that represents the number written in words.

- a) 5 5 5 5 5      five thousand
- b) 2 2 2 2 2      twenty thousand
- c) 9 9 9 9 9      ninety
- d) 7 7 7 7 7      seven hundred
- e) 3 3 3 3 3      thirty thousand
- f) 8 8 8 8 8      eight hundred


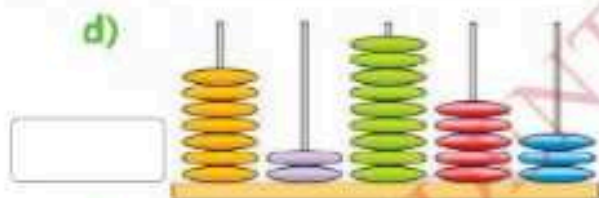
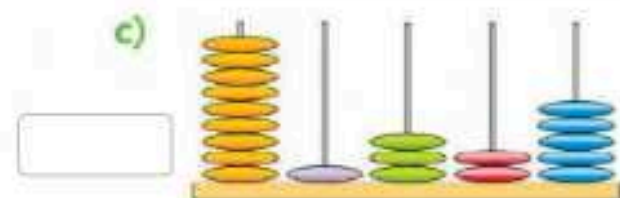
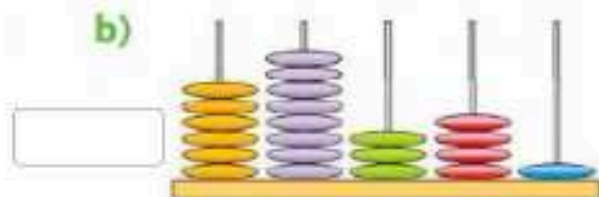
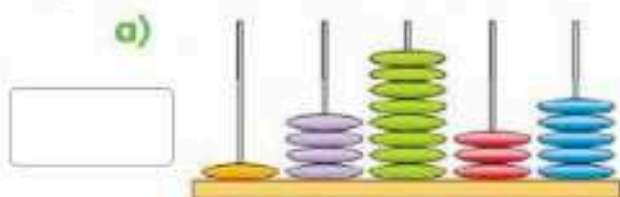
### Try this

A car has travelled 49599 kilometres.

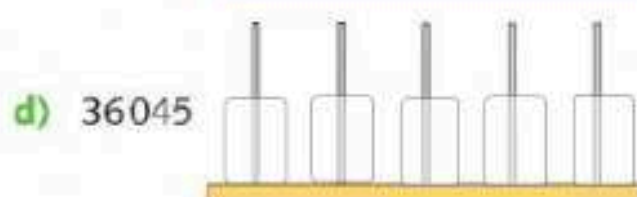
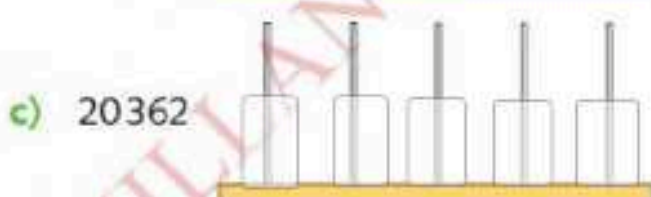
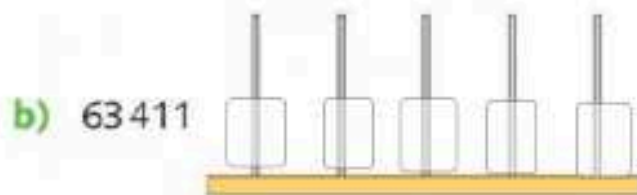
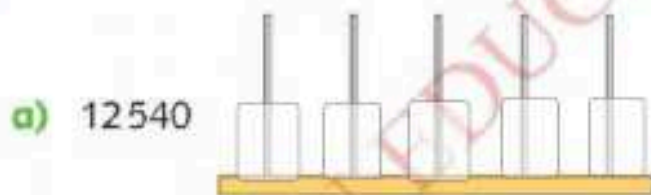
0 4 9 5 9 9

How far will it have travelled after 1 kilometre more?  
(Hint: Add 1 kilometre.)

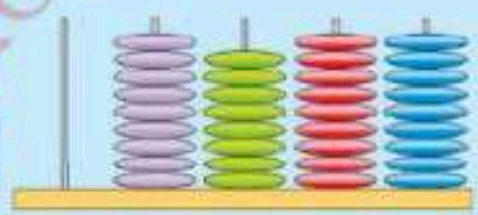
2 Write the number shown on each abacus.



3 Draw the correct number of beads on each abacus to match these numbers.



Try this



The abacus shows 9899.  
A number is 101 more than 9899.  
How many beads are needed to show this number?