

This file has been downloaded from the Almanahj website



The file: Math first term test

[Almanahj Website](#) ⇒ [American curriculum](#) ⇒ [1st Grade](#) ⇒ [Math](#) ⇒ [Term 1](#)

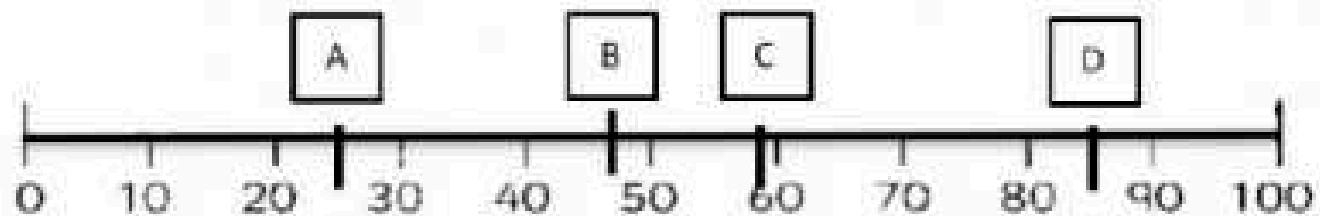
More files for: 1st Grade subject Math - Term 1

Worksheet about Math Pattern	1
Exam about number 6 and 7 and 8	2
Missing addend (whole tens) sums with 150	3
Adding whole tens (2 addends) numbers - sum 100 or less	4
Adding whole tens (2 addends) numbers - sum 90 or less	5
Adding whole tens (2 addends) numbers - sum 80 or less	6
Adding whole tens (2 addends) numbers - sum 70 or less	7

Social Media links for 1st Grade



Question 1 : where is number 85 ?



a. A

b. B

c. C

d. D

Question 2. 3. The  card is number pairs to 20.



a. 7

b. 8

c. 20

d. 13

Question 3 : Find the missing number in the triangle.



a. 30

b. 40

c. 50

Question 4: Find number pair of 20 :

a. $19 + 2$

b. $19 + 1$

c. $19 + 3$

Question 5 : Find the midpoint number :

10 11 12 13 14 15 16 17 18 19 20

a. 10

b. 15

c. 20

Question 6 : What number is it ?

20

a. Ten

b. twelve

c. twenty

Question 7 : Which number is Less than 75 and More than 60 ?

a. 65

b. 80

c. 90

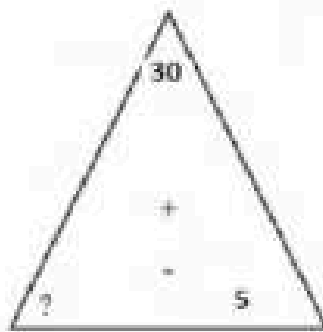
Question 8 : Find number pairs of 30 :

a. $20 + 3$

b. $10 + 10$

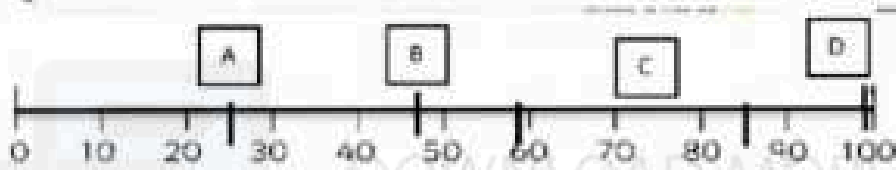
c. $20 + 10$

Question 9 : Find the missing number :




- a. 20 b. 15 c. 25

Question 10 : Where is number 99 ?



- a. A b. B c. C d. D

Question 11 : How many dots are there ?



- a. 25 b. 24 c. 23

Question 12 : What is the next number ?

12 , 14 , 16 , 18 , 22 , 26

- a. 12 , 14 , 16 , 18 , 20 , 22 , 24 , 26
b. 12 , 14 , 16 , 18 , 19 , 22 , 23 , 26
c. 12 , 14 , 16 , 18 , 20 , 22 , 25 , 26

Question 13 : What is the midpoint number ?

20 , 21 , 22 , 23 , 24 , 25 , 26 , 27 , 28 , 29 , 30

- a. 20 b. 25 c. 29

Question 14 : Find the equal of: $15 + 5 =$

- A. $10 + 5$ B. $5 + 20$ C. $10 + 10$

