

This file was downloaded from the American Curriculum website



الملف numbers decomposing and Composing about Worksheet

[Almanahj Website](#) → [American curriculum](#) → [2nd Grade](#) → [Math](#) → [Term 1](#) → [The file](#)


More files for 2nd Grade , Subject Math , Term 1

Worksheet about Number Line	1
Worksheet about Review before exam	2
Worksheet about Subtract No renaming Units and Tens and Hundreds and Thousand	3
Worksheet about Addition with renaming and Adding 3 digit numbers	4
Worksheet about Addition and subtraction	5
Worksheet about Angles measurement	6
Worksheet about Whole numbers up to 1000	7

MATH – SECTION 1 – LESSON 4

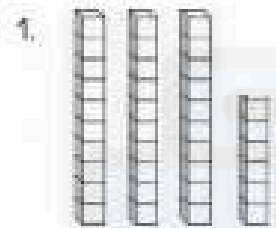
Composing and Decomposing numbers

Task 1: Look at the blocks and fill in the blanks.



4 tens and 1 one


$$40 + 1 = 41$$



..... and

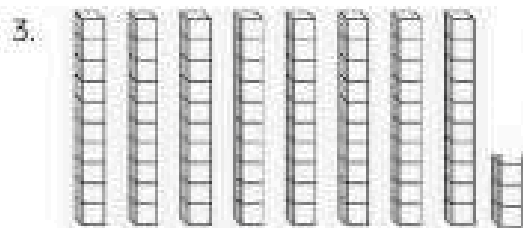
$$..... + =$$

FROM




..... and

$$..... + =$$



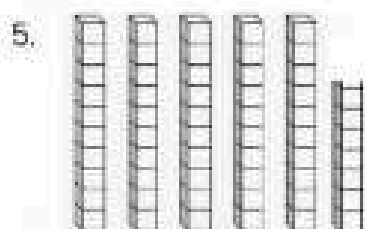
..... and

$$..... + =$$



..... and

$$..... + =$$



..... and

$$..... + =$$

Q. $23 = 20 + 3$

2 tens and 3 ones

1. $54 =$

and

2. $16 =$

and

3. $51 =$

and

4. $37 =$

and

5. $82 =$

and

6. $49 =$

and

7. $65 =$

and

8. $31 =$

and

9. $27 =$

and

10. $80 =$

and

DOWNLOAD MORE
FROM
alManahj.com/us