

This file has been downloaded from the Almanahj website



The file: Worksheet about Matrial and solutions and Light

[Almanahj Website](#) ⇒ [American curriculum](#) ⇒ [3rd Grade](#) ⇒ [Science](#) ⇒ [Term 1](#)

More files for: 3rd Grade subject Science - Term 1

[Worksheet about Food chain](#)

1

Social Media links for 3rd Grade



### III. Match the following.



DOWNLOAD MORE FROM

alManabj.com/us

### IV. Look at the pictures and place 😊 or ☹️ based on their solubility.





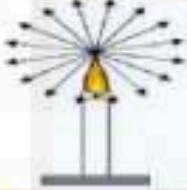


VI. Look at the picture and label the diagram. **Chryi**



Match the following

	Measuring capacity <a href="http://alManahj.com/us">alManahj.com/us</a>
	Measuring time
	Measuring length
	Measuring mass
	Measuring Temperature

Match the following

	<p>When light falls on opaque object, it bounces back, This is called Reflection of light</p>
	<p>We can see things because of light</p>
	<p>Light has 7 visible components</p>
	<p>Sun is the main source of light</p>
	<p>Light travels in straight line</p>
	<p>Shadow is longest during morning and evening and shortest in noon.</p>
	<p>Light travels in all direction</p>
	<p>When light passes from one medium to another, it bends, This is called Refraction.</p>

DOWNLOAD MORE FROM [alManahj.com/us](http://alManahj.com/us)