

This file was downloaded from the American Curriculum website



الملف Worksheet about line Number

[Almanahj Website](#) → [American curriculum](#) → [4th Grade](#) → [Math](#) → [Term 1](#) → [The file](#)

More files for 4th Grade , Subject Math , Term 1

Worksheet about Maths Assessment	1
Worksheet about statement sums and methods of multiplication	2
Worksheet about finding area	3
Worksheet about decimal numbers	4
Worksheet about Fraction	5
Worksheet about 5 digit numbers	6
Worksheet about Divisibility	7



UNIT 10: Integer numbers

Lesson 1: Number line

I. Basic knowledge

II. Vocabulary

English words	Vietnamese meaning
Integer number	Số nguyên
Positive number	Số nguyên dương
Negative number	Số nguyên âm
Opposite numbers	Số đối
Number line	Trục số

III. Practice

1. Write the *opposite numbers* for the numbers below.

a. 5

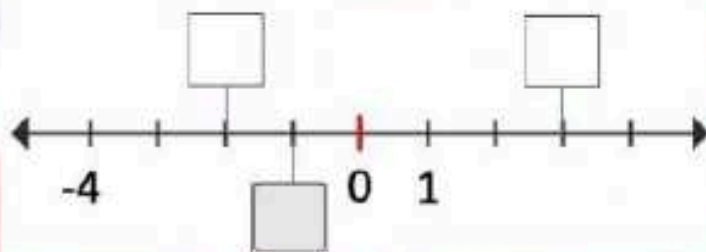
b. -13

c. 9

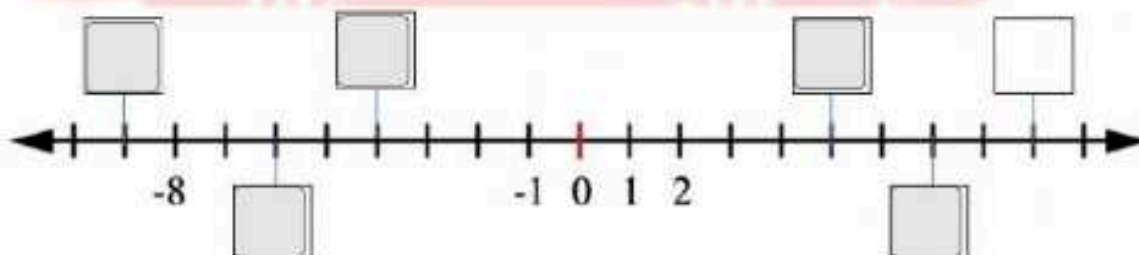
d. -25

2. Complete the number line

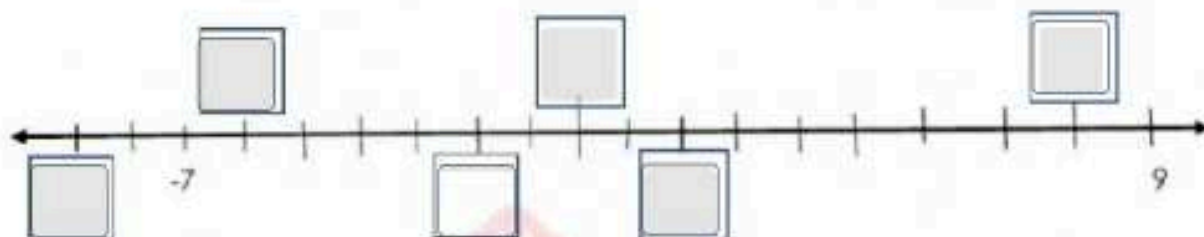
a.



b.



3. Label these integers on the number line below: -6 ; 8 ; -9 ; 0 ; 2 ; -2



4. Choose the correct answer.

a. On a number line, negative numbers are located (*left/right*) of zero.

b. On a number line, positive numbers are located (*left/right*) of zero.

c. On a number line, -5 would be located (*left/right*) of 4 .

d. On a number line, -10 would be located (*left/right*) of -7 .

TRƯỜNG TIỂU HỌC
LÊ QUÝ ĐÔN