


This file was downloaded from the American Curriculum website



Revision Math about Worksheet الملف

[Almanahj Website](#) → [American curriculum](#) → [1st Grade](#) → [Math](#) → [Term 1](#) → [The file](#)

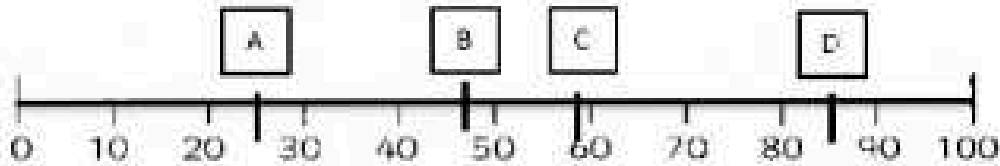
More files for 1st Grade , Subject Math , Term 1

<a href="#">Worksheet about Ordinal Numbers</a>	1
<a href="#">Worksheet about Writing Numbers in Words</a>	2
<a href="#">Worksheet about Order of numbers</a>	3
<a href="#">Worksheet about Before and after Numbers 1 to 20</a>	4
<a href="#">Worksheet about Time Timetables Sequences Multiplying and dividing by 10, 100</a>	5
<a href="#">Worksheet about Linear and non linear sequences</a>	6
<a href="#">Worksheet about Place Value Chart</a>	7

# REVISION - SEMESTER I

## MATHS Grade 2 ( No.1)

1. Where is number 85?



a. A

b. B

c. C

d. D

2. What number is on the question mark '?'?

a. 9

b. 3

c. 7

d. 10



3. The  card is number pairs to 20. What number is on the other side of  card?

a. 7

b. 8

c. 20

d. 13



4. The  card is number pairs to 30. What number is on the other side of  card?

a. 20

b. 6

c. 5

d. 30



5. What is the equivalent of  $36 - 6$ ?

a.  $23 + 4$

b.  $22 + 9$

c.  $22 + 8$

d.  $13 + 6$

6. What is the equivalent of  $39 + 2$ ?



a.  $28 + 14$



b.  $50 - 9$



c.  $12 + 32$



d.  $42 - 8$

7. What is 27 rounded to the nearest 10?



a. 15



b. 10



c. 20



d. 30

8. What is 75 rounded to the nearest 10?



a. 80



b. 90




c. 100



d. 86

9. Choose the correct answer:



A.  $10 \times 3$



B.  $5 \times 2$

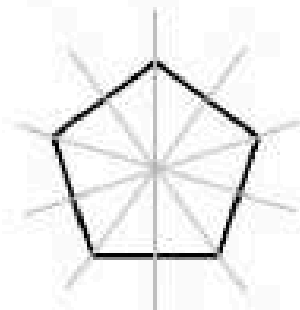


C.  $10 + 10$



D.  $3 \times 5$

10. How many lines of symmetry?



A. 4



B. 5

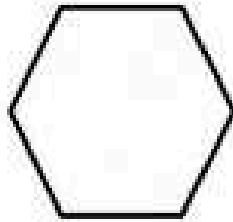


C. 10




D. 6

11. What shape is it?



- A. Pentagon       B. Hexagon       C. Circle       D. Triangle

12. How many triangles are there?




- A. 8       B. 4       C. 6       D. 10

13. A tricycle has 3 wheels. How many wheels are there on 4 tricycles?

- A. 7       B. 6       C. 12       D. 1

14. Choose the correct answer:



- A.  $4 \times 3$        B.  $10 \times 4$        C.  $4 + 10$        D.  $10 \times 10$


15. Find the equal of:

$$15 + 5 =$$

the equal of: bằng với

- A.  $10 + 5$      B.  $5 + 20$      C.  $10 + 10$      D.  $20 - 10$

16. Which boat is the furthest? Circle the correct answer:




DOWNLOAD MORE  
FROM

[alManahj.com/us](http://alManahj.com/us)

- A.     B.     C.     D.

17. Which giraffe is the furthest? Circle the correct answer:



- A.     B.     C.     D.

18. How long is the pencil?



- A. 7 centimeters       B. 8 centimeters       C. 9 centimeters

a. Box A      b. Box B      c. Box A&B

19.

If Lucy is paid \$1 for every wheel she cleans, how many dollars does she get to clean five tricycles?

- a. 10       b. 15       c. 20

20. What equipment will you need to measure the length?

- a. ruler       b. pencil       c. pen

21.

There are 46 students in a class. 24 of them are girls. How many boys are there in the class?

- a. 70       b. 22       c. 48

22. Jose keeps a football in the air within 1 minute


John keeps a football in the air within 30 seconds

Who keeps a football in the air longer? –

- a. Jose       b. John       c. both

23. What time is it?

- a. 2 o'clock  
 b. 12 o'clock  
 c. 3 o'clock



There are 28  .

14  fly away.

24. How many are left? \_\_\_\_\_

- a. 12       b. 15       c. 14

25. Sam ran the race 12 seconds

Vicky ran the race 22 seconds

Who isn't the winner?

- a. Sam  b. Vicky  c. both

26. Mary is 1,20m tall

Cherry is 125cm tall

Who is taller?

- a. Mary  b. Cherry  c. both

27. Which was the best way to start a jump?

- a. stand up  b. sit down  
 c. bend your knee and push on your feet.

28. Jack jumped and touched my hand

John jumped and didn't touch my hand

Who managed to jump the highest?

- a. Jack  b. John  c. nobody

29. You have number 24. Should you round up or round down?

- a. Round up  b. round down

30. How many faces can you see?

- a. 3 faces    b. 12 faces    c. 6 faces

