

This file was downloaded from the American Curriculum website



Plural about Worksheet الملف

[Almanahj Website](#) → [American curriculum](#) → [1st Grade](#) → [Math](#) → [Term 1](#) → [The file](#)

More files for 1st Grade , Subject Math , Term 1

Important math exam	1
Worksheet about less and greater number	2
Worksheet about even and odd number	3
Worksheet about Plural	4
Mathematics review test	5
Worksheet about number pair in math	6
Worksheet about Ordinal Numbers	7

$$7 + 4$$

A

10

B

11

C

12

$$13 + 6$$

A

18

B

19

C

20

$$7 + 7$$

A

12

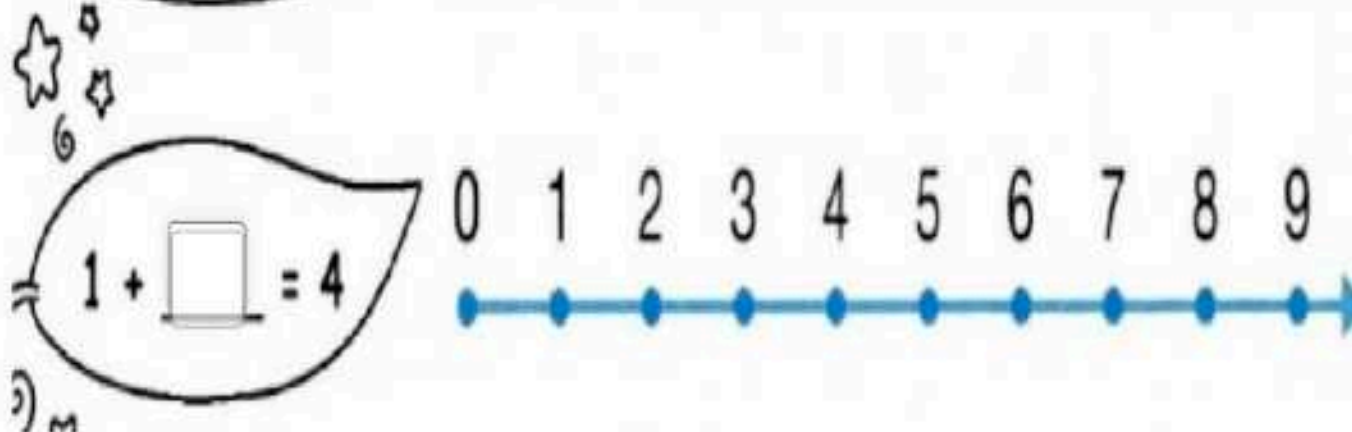
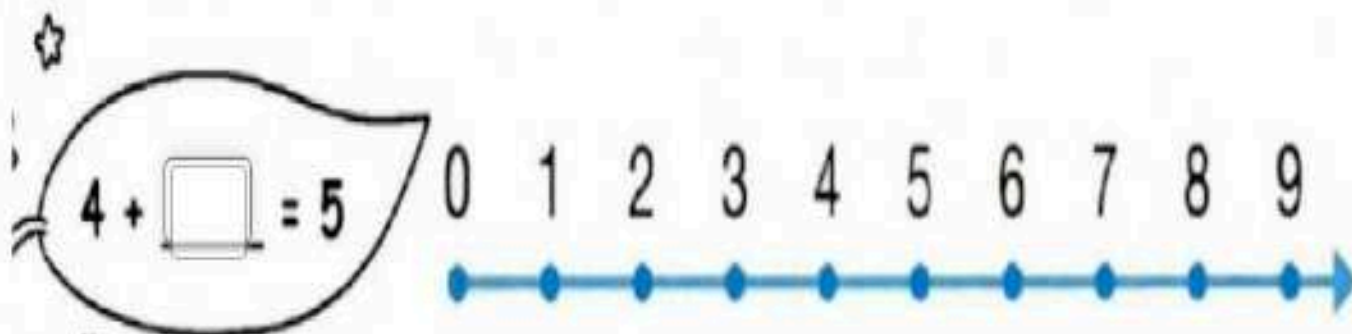

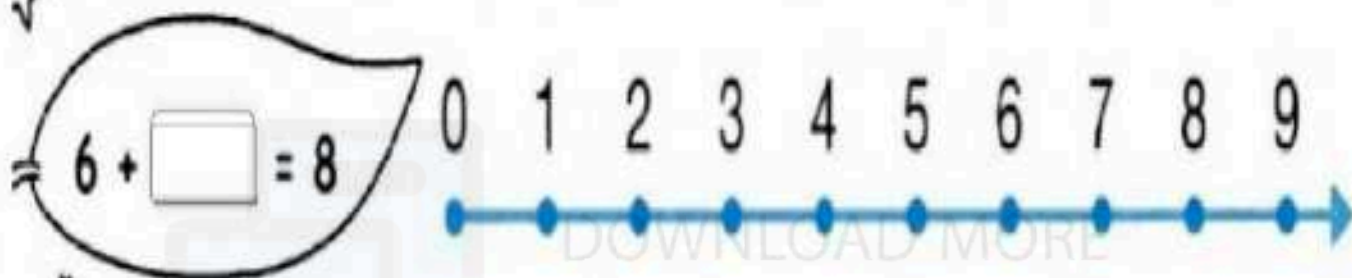
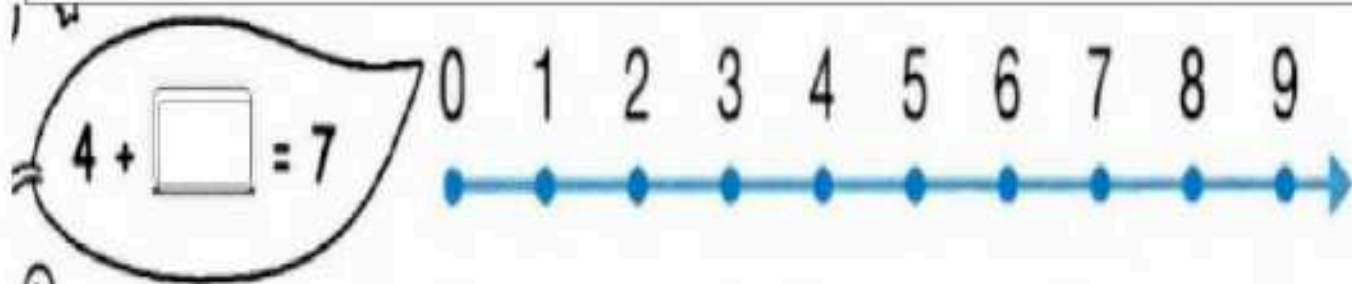
B

13

C

14

Draw the number line and fill in the missing in the missing numbers.




Fill in the blanks with the correct answers.

$$\begin{array}{r} \square \\ 39 \\ + 5 \\ \hline \square \square \end{array}$$

$$\begin{array}{r} \square \\ 55 \\ + 7 \\ \hline \square \square \end{array}$$

$$\begin{array}{r} \square \\ 48 \\ + 8 \\ \hline \square \square \end{array}$$

$$\begin{array}{r} \square \\ 56 \\ + 9 \\ \hline \square \square \end{array}$$


$$\begin{array}{r} \square \\ 13 \\ + 7 \\ \hline \square \square \end{array}$$

$$\begin{array}{r} \square \\ 29 \\ + 2 \\ \hline \square \square \end{array}$$

$$\begin{array}{r} \square \\ 63 \\ + 9 \\ \hline \square \square \end{array}$$

$$\begin{array}{r} \square \\ 59 \\ + 4 \\ \hline \square \square \end{array}$$

DOWNLOAD MORE
FROM

alManahj.com/us