

This file was downloaded from the American Curriculum website



الملف water of Sources about Worksheet

[Almanahj Website](#) → [American curriculum](#) → [1st Grade](#) → [Geology](#) → [Term 1](#) → [The file](#)

More files for 1st Grade , Subject Geology , Term 1

[Worksheet about The planet Earth](#)

1



Science
Year ONE
Topic 1: water

EIS *knowledge is power*

WORKSHEET NO.3

Student name:class 1..... Date: / 5/ 2022

1.what is more on the earth?

a. land

b. water

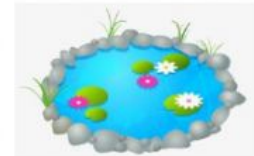


2. what is shown in the image?

a. ocean

b. river

c. pond



3. Identify the image?

a. river

b. lake

c. pond



4.which of the water bodies pair has land on all the sides?

a. river and stream.

b. lake and pond.

c. ocean and sea.

5. we can drink water from a _____

6. select the color we generally use on the map to show different features:

a. land: _____

b. ocean: _____





c. river: _____



7. this is a _____



2. match each animal to the kind of water it lives in.



stream

ocean

lake

pond

river