

This file was downloaded from the American Curriculum website




earth and moon sun The about Worksheet الملف

[Almanahj Website](#) → [American curriculum](#) → [3rd Grade](#) → [Geology](#) → [Term 1](#) → [The file](#)

More files for 3rd Grade , Subject Geology , Term 1

Worksheet about Earth	1
Worksheet about Earth	2
Worksheet about earths rotation and revolution and phases of the moon and eclipses	3
Worksheet about Layers of the earth and water	4
Worksheet about Earth in the Universe	5
Worksheet about The structure of the earth	6
Worksheet about Layers of the Earth	7

Ortography	/5
Punctuality	/5
1. Identify the influence of the sun and the Moon on some surface of the Earth.	/22
2. Recognize the Moon phases.	/20
3. Identify sun, moon and Earth characteristics	/36
4. Reflect about the influence of the sun and the Moon on some surface of the Earth	/12

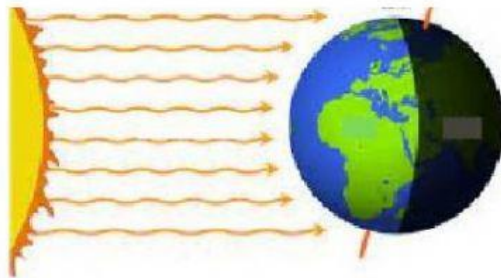


1. Choose the correct answer and complete the sentences.

The Sun is a

It is the of the Solar System

VS

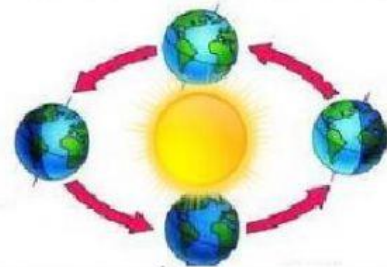


TAKES

or
hours or days

CAUSES

and



TAKES

or
days or years



CAUSES



2. Drag the Moon Phases.

The diagram illustrates the Moon's phases as seen from Earth. At the center is a globe of Earth. To its right is a sun icon. Four moon phase icons are arranged around Earth: a white circle (New moon) on the left, a half-black/half-white circle (First quarter) at the top, a solid black circle (Third quarter) on the right, and a half-white/half-black circle (Full moon) at the bottom. Yellow arrows show a clockwise cycle between these phases. Below each moon icon is a blue rectangular box for labeling. At the top, four colored boxes are labeled: 'New moon' (green), 'Full moon' (yellow), 'First quarter' (orange), and 'Third quarter' (blue).

3. Drag the characteristic to the corresponding place

THE MOON	THE EARTH	THE SUN
		

1 IT HAS GOT WATER AND LAND.

2 IT IS A VERY BIG STAR.

3 IT IS A NATURAL SATELLITE.

4 IT IS AT THE CENTRE OF THE SOLAR SYSTEM.

5 IT IS A SMALL PLANET.

6 IT HAS CRATERS.

7 IT MOVES AROUND THE EARTH.

8 IT MOVES AROUND THE SUN.

9 IT GIVES US HEAT AND LIGHT.

4. Write 3 sentences about what how the sun the moon and the Earth helps you in orientation in time and space.

REFLECTION

Handwriting practice line with a solid top and bottom border and a dashed middle line.

Handwriting practice line with a solid top and bottom border and a dashed middle line.

Handwriting practice line with a solid top and bottom border and a dashed middle line.

