

This file was downloaded from the American Curriculum website



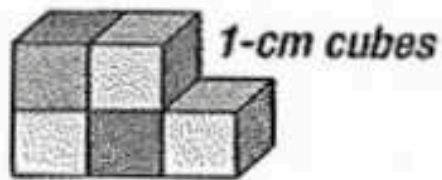
Maths Mental Worksheet الملف

[Almanahj Website](#) → [American curriculum](#) → [4th Grade](#) → [Math](#) → [Term 1](#) → [The file](#)

More files for 4th Grade , Subject Math , Term 1

<a href="#">Worksheet about Review math for mid term 2</a>	1
<a href="#">Worksheet about Math Revision</a>	2
<a href="#">Worksheet about adding numbers</a>	3
<a href="#">Worksheet about Complete patterns</a>	4
<a href="#">Worksheet about revision final test</a>	5
<a href="#">TitleWorksheet about multiply numbers</a>	6
<a href="#">Math Quiz</a>	7

1. What is the surface area?


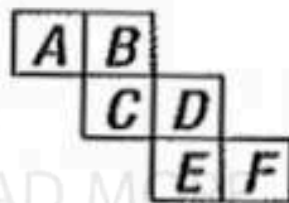


2.  $6716 - 8 =$

3.  $100 + 70 =$

4.  $\frac{2}{3} + \frac{2}{6} =$    $\frac{\quad}{6} =$    $\frac{\quad}{3} =$

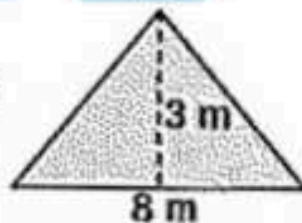
5. Fold the net. Which letter is missing from the blank face of the cube?



6.  $1.08 =$    $+ 0.$

7. Is 1.77 closer to 1.70 or 1.80?

8. Area =   $m^2$



9. Simplify  $\frac{2}{10}$

10. This angle is most likely:

$45^\circ$    $10^\circ$    $80^\circ$



11.  $8 \times 9 =$    $= 4 \times$

12.  $\frac{6}{10} =$    $\frac{\quad}{100} =$   %

13. Which numeral has the lowest value?

(a)   $-4$

(b)   $2$


(c)   $0$

(d)   $-1$

14.  $7 - \frac{1}{3} =$

15. Write the *fifteenth of September* in numerals.

16. What type of triangle is this?



17. What is one-quarter of half a million?

18. Write the mean (average) of these netball scores: 3, 15, 20, 2.

19. 6, 12, 18, 24, ,

20. Shade the heavier weight.

