

This file was downloaded from the American Curriculum website



area finding about Worksheet الملف

[Almanahj Website](#) → [American curriculum](#) → [4th Grade](#) → [Math](#) → [Term 1](#) → [The file](#)

More files for 4th Grade , Subject Math , Term 1

Aworksheet about decimal numbers	1
Worksheet about Fraction	2
Worksheet about 5 digit numbers	3
Worksheet about Divisibility	4
Worksheet about Divisibility	5
Worksheet about Triangles	6
Worksheet Mental Maths	7



UNIT 6: PERIMETER AND AREA

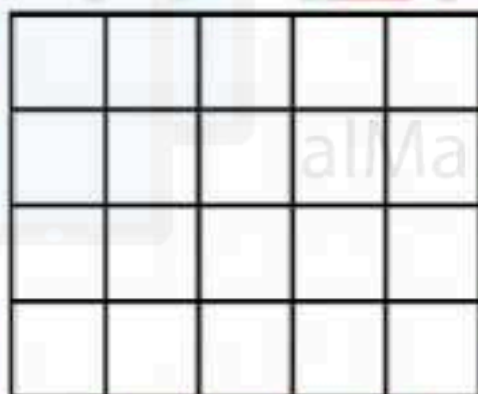
Lesson 2: Area

II. Vocabulary

English words	Meaning
Area	Diện tích
Square unit	Đơn vị diện tích
Width	Chiều rộng
Length	Chiều dài


III. Practice

1. Determine the area of each shape of counting the number of squares.




a. The area of this shape is

square units.



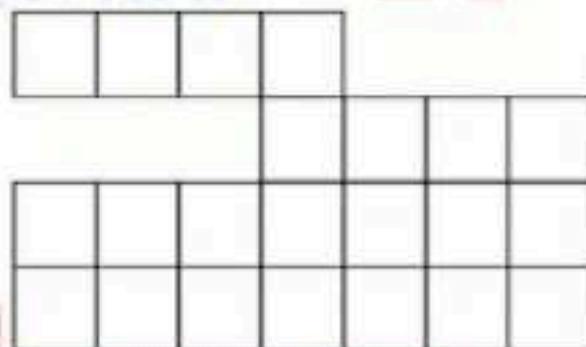
b. The area of this shape is

square units.



c. The area of this shape is

square units.



d. The area of this shape is

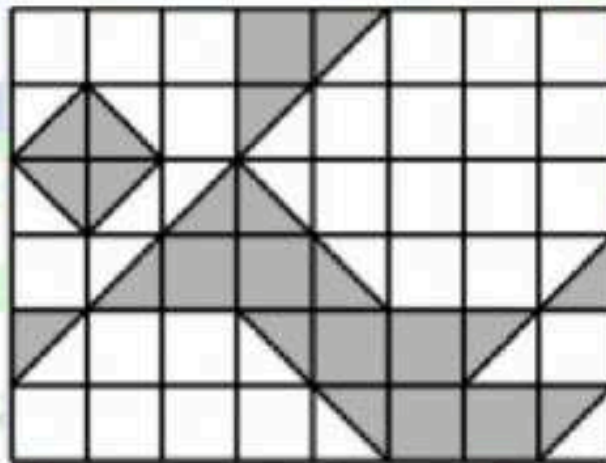
square units.

2. Work out the area of the following shapes.

No	Question	Answer
1	A rectangle measuring 7cm by 4cm.	Area = <input type="text"/> ...cm ² .
2	A square with sides of 10cm.	Area <input type="text"/> ...cm ² .
3	A rectangle with sides of 11cm and 16cm.	Area = <input type="text"/> ... cm ² .
4	A square with sides of 9mm.	Area = <input type="text"/> ...mm ² .

3. (IMAS 2012 – Round 2)

In the 6×8 square grid, each square is 1cm^2 , what is the shaded area, in 1cm^2 .



Answer: ...cm².