

This file was downloaded from the American Curriculum website



Geology about Worksheet الملف

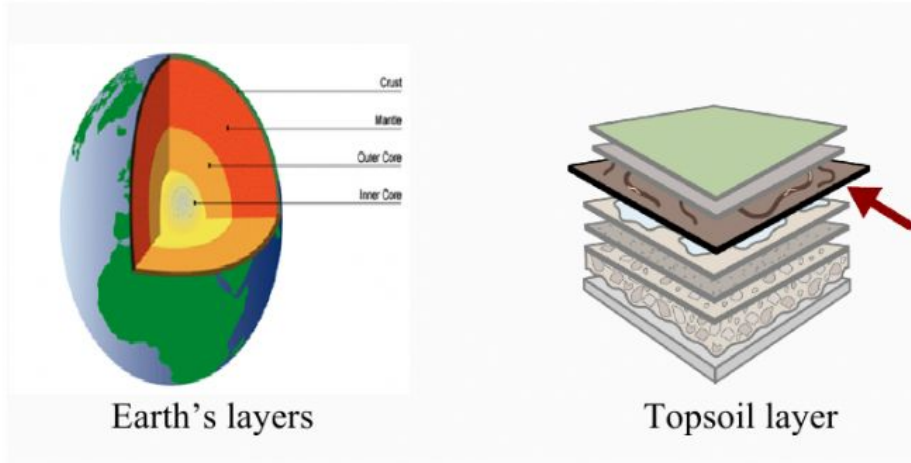
[Almanahj Website](#) → [American curriculum](#) → [8th Grade](#) → [Geology](#) → [Term 1](#) → [The file](#)

More files for 8th Grade , Subject Geology , Term 1

Student Name: _____ Date: _____

Level 2 Question 1

1. Identify the image that shows all of Earth's layers.



(Teacher choose one)

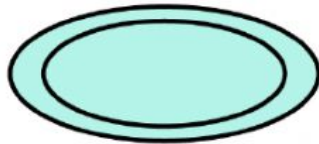
CUE/S: "Show me your answer."

"Which would you relate to the reclassification of Pluto?"

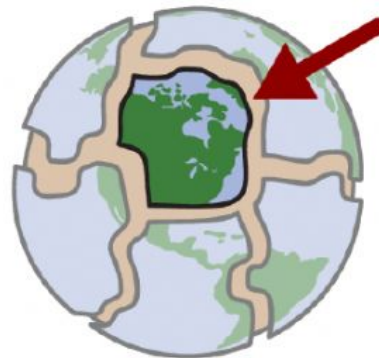
1

Student Name: _____ Date: _____

2. Which image shows an irregular shape slab of solid rock?



Plate



Tectonic Plate

(Teacher choose one)

CUE/S: "Show me your response to the question."
"Relate your previous knowledge and respond."

Student Name: _____ Date: _____

Level 2 Question 3

3. Earth's volcanoes occur because its crust is broken into 17 major, rigid tectonic plates. Select the image of a volcano.

A. Volcano Taco



B. Volcano



(Teacher choose one)

CUE/S: "Show your best response to the question above."
"Can you compare the two choices and chose the best answer?"

3

Student Name: _____ Date: _____

Level 2 Question 4

4. Which image shows the rock cycle?

A. B.



(Teacher choose one)
CUE/S:

“Show the image that best answer the question.”
“Relate your response to prior knowledge and tell...”

4