

This file was downloaded from the American Curriculum website




division and multiplication Revise about Worksheet الملف

[Almanahj Website](#) → [American curriculum](#) → [2nd Grade](#) → [Math](#) → [Term 1](#) → [The file](#)

More files for 2nd Grade , Subject Math , Term 1

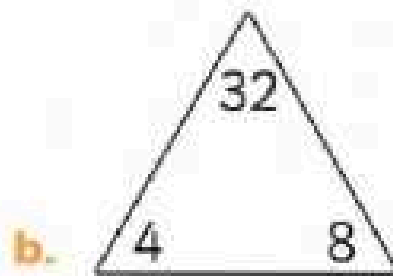
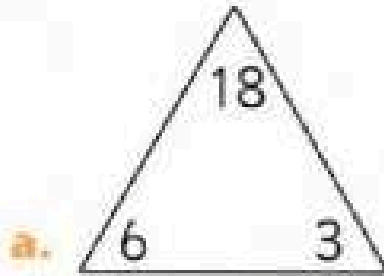
Important Math Review Befor Exam	1
Worksheet about Composing and decomposing numbers	2
Worksheet about Number Line	3
Worksheet about Review before exam	4
Worksheet about Subtract No renaming Units and Tens and Hundreds and Thousand	5
Worksheet about Addition with renaming and Adding 3 digit numbers	6
Worksheet about Addition and subtraction	7



REVISION





Exercise 1: Write the fact family of each set of numbers in the triangle.




<input type="text"/>	x	<input type="text"/>	=	<input type="text"/>
<input type="text"/>	x	<input type="text"/>	=	<input type="text"/>
<input type="text"/>	÷	<input type="text"/>	=	<input type="text"/>
<input type="text"/>	÷	<input type="text"/>	=	<input type="text"/>

<input type="text"/>	x	<input type="text"/>	=	<input type="text"/>
<input type="text"/>	x	<input type="text"/>	=	<input type="text"/>
<input type="text"/>	÷	<input type="text"/>	=	<input type="text"/>
<input type="text"/>	÷	<input type="text"/>	=	<input type="text"/>

Exercise 2: Divide the apples equally in the baskets. Complete the table.



Total number of apples	Baskets	Apples in each basket	Total number of apples	Baskets	Apples in each basket
8	2	<input type="text"/>	<input type="text"/>	<input type="text"/>	<input type="text"/>



REVISION



Exercise 3: Find the missing dividend.

$$\boxed{\quad} : 8 = 3$$

$$\boxed{\quad} : 4 = 5$$

$$\boxed{\quad} : 10 = 6$$

$$\boxed{\quad} : 2 = 9$$

$$\boxed{\quad} : 6 = 3$$

$$\boxed{\quad} : 1 = 80$$

$$\boxed{\quad} : 4 = 4$$

$$\boxed{\quad} : 7 = 5$$

$$\boxed{\quad} : 9 = 10$$

Exercise 4: There are 18 sweets in the bag. Alex, Ken and Jade share them equally. How many sweets does each of them get?

--	--	--	--	--	--

Answer:

Exercise 5: Amy buys 10 cupcakes. She shares them equally with her sister. How many cupcakes do they each have?

--	--	--	--	--	--

Answer:

