

This file was downloaded from the American Curriculum website



Exam Befor Review Math Important الملف

[Almanahj Website](#) → [American curriculum](#) → [2nd Grade](#) → [Math](#) → [Term 1](#) → [The file](#)

More files for 2nd Grade , Subject Math , Term 1

Worksheet about Composing and decomposing numbers	1
Worksheet about Number Line	2
Worksheet about Review before exam	3
Worksheet about Subtract No renaming Units and Tens and Hundreds and Thousand	4
Worksheet about Addition with renaming and Adding 3 digit numbers	5
Worksheet about Addition and subtraction	6
Worksheet about Angles measurement	7

REVIEW – MATHS 2nd


Question 1: How many fingernails can be counted from 3 pairs of hands?

a. 10

b. 100

c. 30

d. 28



Question 2: The difference between 20 and 9 is.....

a. 22

b. 11

c. 13

d. 29

Question 3: Who is $30 + 5$?

a. I'm 27

b. I'm 35

c. I'm 50

d. I'm 23

Question 4: Which array can match?



a. $3 + 3 + 3$

b. $3 \times 3 \times 3$

c. $9 + 9$

d. $4 + 4 + 4$

Question 5: Find the difference between: 40 and 20

a. 20

b. 60

c. 30

d. 10

Question 6: Find the difference between: 65 and 10

a. $65 - 10 = 55$

b. $65 + 10 = 75$

c. $65 + 10 = 85$

d. $65 - 0 = 65$

Question 7: Kim has 30 candies; Ken gave her 5 more. How many candies were there in total?

a. $30 - 5 = 25$

b. $30 + 5 = 35$

c. $5 + 5 = 10$

d. $30 + 30 = 60$

Question 8: Find the matching number sentence



a. $16 - 4 = 10$

b. $10 - 6 = 4$

c. $10 + 6 = 16$

d. $16 - 6 = 10$

Question 9: Are these lines of symmetry?



A. Yes

B. No

Question 10: Choose the correct answer




A. line of symmetry

B. Reflection

C. Fold

D. Mirror line

Question 11: How long is this?



A. one metre

B. one litre

C. one centimetre

D. one kilometre

Question 12: What shape is it?



A. Pentagon

B. Hexagon

C. Circle

D. Triangle

Question 13. What is this?



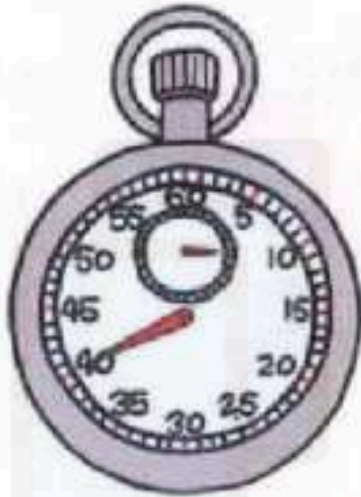
A. sandcastle

B. one-minute sand timer

C. clock

D. jar

Question 14. How many seconds is shown on the stopwatch?



A. fourteen

B. fourteen

C. forty

D. forty

Question 15: How many lines of symmetry?



A. 4

B. 5

C. 10

D. 6

Question 16. Which is balanced?



A.



B.



C.



D.

Question 17: This is the **number pair to 20**.

4 | ?

Find the missing number?

a. 24

b. 16

c. 14

d. 15

Question 18: Which number below is less than 307?

a. 308

b. 407

c. 703

d. 233

Question 19: Which number below is the odd one out?

a. 2

b. 7

c. 9

d. 11

Question 20: Which number sentence below is incorrect?

a. $8 < 9$

b. $4 = 2 + 2$

c. $15 > 2$

d. $180 < 108$

Question 21: Which number below is a multiple of 3?

a. 5

b. 15

c. 20

d. 100

Question 22: Gopal ran the race in *12 seconds*

Vishni ran the race in *22 seconds*

Dinesh ran the race in *10 seconds*

Ajit ran the race in *15 seconds*

Who wasn't the winner?

a. Gopal

b. Vishni

c. Dinesh

d. Ajit

Question 23: Mary is 120cm tall

Cherry is 125cm tall

Ben is 130cm tall

Lucy is 123cm tall

Who is the tallest?

a. Mary

b. Ben

c. Cherry

d. Lucy

Question 24: Which banknote has the highest value?

a.



b.



c.



d.



Question 25: If I use a \$10 bill to pay for something that costs \$8, how much change would I get?

- a. 3
- b. 4
- c. 5
- d. 2

Question 26: If an ice cream costs \$2, and I get \$3 change, what banknote did I use?

- a. \$6
- b. \$5
- c. \$8
- d. \$10

Question 27: If I wanted to buy a sandwich \$3, a bottle of water \$1 and a banana \$0.25. How much would it cost me?

- a. \$5
- b. \$4
- c. \$4.25
- d. \$3

Question 28: Chose the correct pattern that the numbers are ordered from the smallest to the largest?

- a. 12, 32, 23, 45, 56
- b. 34, 43, 56, 65, 71
- c. 32, 38, 54, 45, 63
- d. 14, 23, 32, 45, 39

Question 29: How many grams on this scale?




a. 200g

b. 300g

c. 2000g

d. 20g

Question 30: Odd one out



Writing

Question 1: Write the array:



.....

Question 2: Write next numbers:

15	25	45	55	75
----	----	-------	----	----	-------	----

Question 3: What shape is this?



Question 4: Order these numbers from the largest to the smallest?

45, 98, 64, 57, 82, 70

.....

Question 5: LOOK, READ AND WRITE T (TRUE) OR F (FALSE)

0. 10 and 101 is a number pair to 201.

 F

1. 607 is less than 609.

2. 45 is greater than 35.

3. 24 is a double of 11.

Question 6: FILL IN THE LESS THAN SIGN (<) OR GREATER THAN SIGN (>) IN THE SUITBLE BLANK.

0. 77 22

1. 29 35

3. 179 174

2. $11-5$ $3+7$

4. $9+12$ $15+4$

Question 7 : SOLVE THE NUMBER STORY BELOW.

Anna went to the supermarket to buy 10 eggs for her mom. On way back home, she met her grandma. She got 120 eggs from her grandma. Later, a neighbor gave her 35 eggs and 10 carrots.

How many eggs in total did Anna bring home?
