

This file was downloaded from the American Curriculum website



الملف Organic chem test part 1

[Almanahj Website](#) → [American curriculum](#) → [12th Grade](#) → [Science](#) → [Term 1](#) → [The file](#)

More files for 12th Grade , Subject Science , Term 1

Worksheet about Photosynthesis	1
Organic chem test part 1	2
Organic chem test part 2	3
Worksheet about Chemical and Physical Changes	4

Instructions

- ✓ Spelling counts
- ✓ Only leave one space between 2 words
- ✓ Leave no spaces inbetween dashes, words and numbers in organic names
Eg 2-methylbut-2-ene
- ✓ No spaces in between ester names
Eg methylpropanoate

Question 1: Multiple choice

Four options are provided as possible answers to the following questions. Each question has only ONE correct answer. Write only the letter (A – D) next to the question number (1.1 – 1.3) on your answer sheet.

1.1 The monomer used to make polyethylene is:

Ethene

Propene

Ethane

Propane

1.2

Which ONE of the following pairs of reactants can be used to prepare the ester propyl butanoate in the laboratory?

A Butan-1-ol and propanoic acid

B Propan-1-ol and butanoic acid

C Butan-1-ol and propanal

D Propan-1-ol and butanal

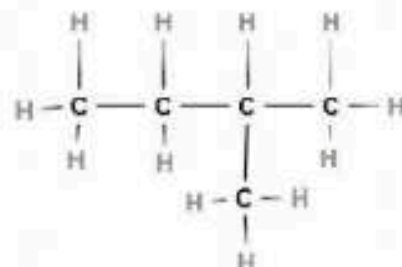
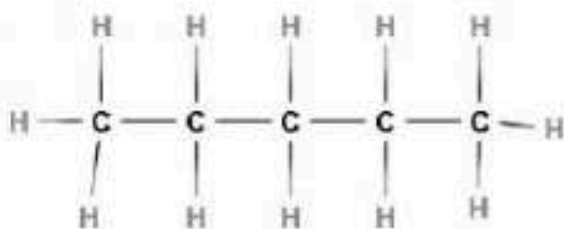
[2 x 2 =4]

SECTION B

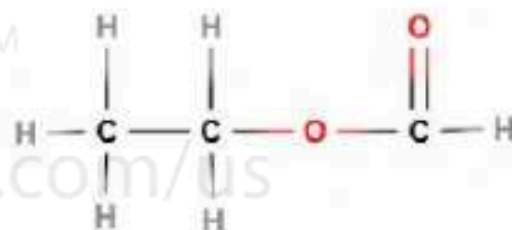
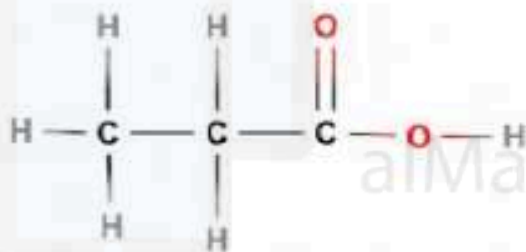
Question 2: one word/term answers (spelling does count)

2.1 State which type of isomers the following are

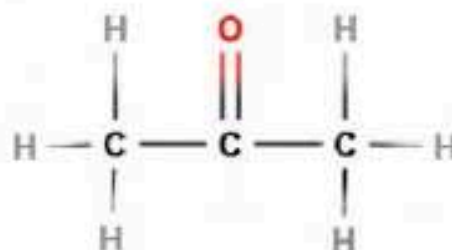
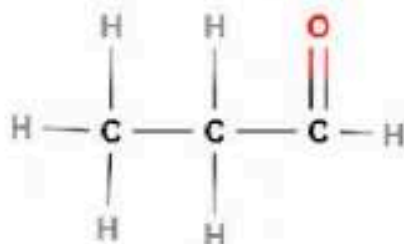
a)



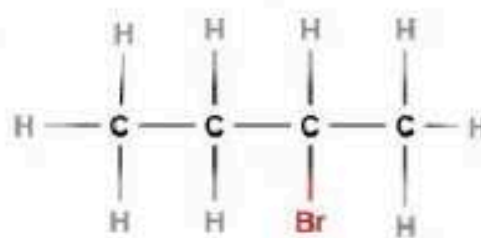
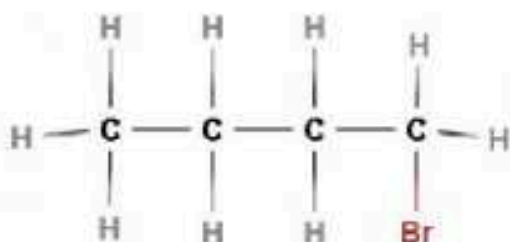
b)



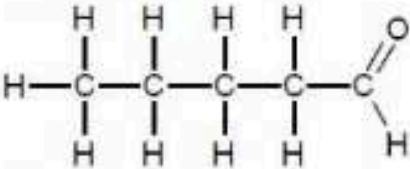
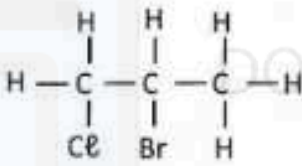
c)



d)



2.2 Consider the following organic compounds represented by the letters A to F and answer the questions that follow:

A	$\text{CH}_3 - \text{CH}_2 - \text{CH}_2 - \text{CH}_3$	B	2-chlorobutane
C	3,3 - dibromobut-1-ene	D	
E		F	CHCl_3

2.2 Is compound **A**, a saturated or unsaturated hydrocarbon? (1)

2.3 Write down name of the homologous series to which compound **D** belongs. (1)

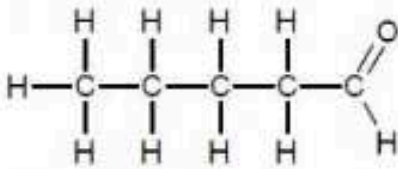
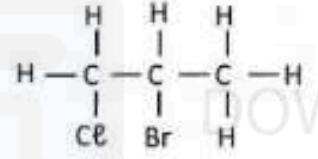
2.4 Is compound **B** a PRIMARY, SECONDARY or TERTIARY haloalkane? (1)

2.5 Compound **F** is commonly known as chloroform. What is its IUPAC name? (1)

2.6 Write down the IUPAC name of compound E. (1)

2.7 Write the name of the products that form when compound A combusts. (2)

2.2 Consider the following organic compounds represented by the letters A to F and answer the questions that follow:

A	$\text{CH}_3 - \text{CH}_2 - \text{CH}_2 - \text{CH}_3$	B	2-chlorobutane
C	3,3 – dibromobut–1–ene	D	
E		F	CHCl_3

2.2 Is compound **A**, a saturated or unsaturated hydrocarbon? (1)

2.3 Write down name of the homologous series to which compound **D** belongs. (1)

2.4 Is compound **B** a PRIMARY, SECONDARY or TERTIARY haloalkane? (1)

2.5 Compound **F** is commonly known as chloroform. What is its IUPAC name?

(1)

2.6 Write down the IUPAC name of compound **E**.

(1)

2.7 Write the name of the products that form when compound **A** combusts. (2)

(2)

[9]

Question 3

Consider the following representation of organic molecules A to F listed in the table below:

A	$\begin{array}{c} \text{O} \\ \parallel \\ \text{CH}_3 - \text{CH}_2 - \text{C} - \text{CH} - \text{CH}_3 \\ \\ \text{CH}_3 \end{array}$	B	$\begin{array}{ccccccc} & \text{H} & & \text{H} & & \text{H} & \\ & & & & & & \\ \text{H} & - \text{C} & - & \text{C} & - & \text{C} & - \text{H} \\ & & & & & & \\ & \text{Cl} & & \text{Br} & & \text{H} & \end{array}$
C	$\begin{array}{ccccccc} & \text{H} & & \text{H} & & \text{H} & & \text{H} \\ & & & & & & & \\ \text{H} & - \text{C} & - & \text{C} & - & \text{C} & - & \text{C} & - \text{H} \\ & & & & & & & \\ & \text{H} & & \text{H} & & \text{H} & & \text{H} \end{array}$	D	Methanal
E	2-methylhex-3-yne	F	$\begin{array}{c} \text{CH}_3 \\ \\ \text{CH}_3 - \text{C} - \text{CH}_3 \\ \\ \text{O} \\ \\ \text{H} \end{array}$

3.1 Write down the letter that represents a compound that:

3.1.1 Is an aldehyde

(1)

3.1.2 Is a saturated hydrocarbon

(1)

3.1.3 Has a general formula of $\text{C}_n\text{H}_{2n-2}$

(1)

3.2 Write down the homologous series to which each of the following compounds belong:

3.2.1 A

(1)

3.2.2 B

(1)

3.2.3 F

(1)

3.3 Compound C belongs to a group of organic compounds, commonly used as:

(1)

[7]

5.3 Which one of the three compounds would you expect to have the highest viscosity? Explain your answer.

Largest surface area

Smallest surface area

Weakest IMF

Stronger IMF

Hydrogen bonding

Van der waals, London

Van der Waals, dipole-dipole

Thus more energy needed to weaken IMF

Thus more likely to be a vapour

Thus higher resistance to flow

Thus less energy needed to weaken IMF

Thus less likely to be a vapour

Thus less resistance to flow

(4)

[9]

Question 6

An experiment is conducted to determine the boiling point of organic compounds with similar molecular mass from three different homologous series, indicated with letters A to C, determined under the same conditions. The results are given in the table below:

ORGANIC COMPOUND	MOLECULAR FORMULA	BOILING POINT (°C)
A	$\text{CH}_3\text{CH}_2\text{CH}_2\text{OH}$	+ 97
B	$\text{CH}_3\text{CH}_2\text{CH}_2\text{CH}_3$	- 1
C	$\text{CH}_3\text{CH}_2\text{CHO}$	+ 48

6.1 Write the NAME of the homologous series to which A belong. (1)

6.2 Identify the:

6.2.1 DEPENDENT variable for this investigation. (1)

6.2.2 INDEPENDENT variable for this investigation. (1)

6.3 Write down the IUPAC name for compound C. (1)

6.4 Which one of the compounds given in the table (write only A, B or C) will have the highest **Vapour pressure**. State the answer and then select the correct key words to explain your answer. FROM

Largest surface area

Smallest surface area

Weakest IMF

Stronger IMF

Hydrogen bonding

Van der waals, London

Van der Waals, dipole-dipole

Thus more energy needed to weaken IMF

Thus more likely to be a vapour

Thus higher resistance to flow

Thus less energy needed to weaken IMF

Thus less likely to be a vapour

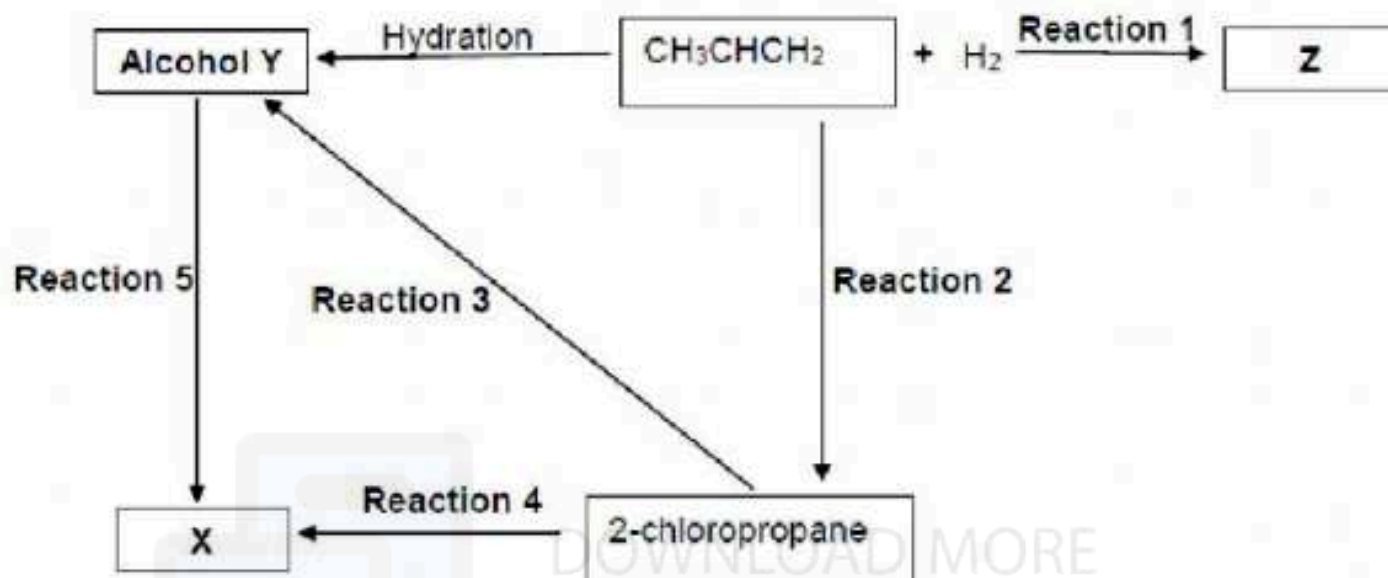
Thus less resistance to flow

(3)

[7]

Question 7

Study the flow diagram below, which represents various organic reactions, and answer the questions that follow.



7.1 **Reaction 1** is an example of an addition reaction. For **Reaction 1** write down:

7.1.1 The type of addition reaction (1)

7.1.2 The FORMULA of a suitable catalyst (1)

7.2 Write down the IUPAC name of compound Y. (1)

7.3 **Reaction 5** is an elimination reaction. For **Reaction 5** write down:

7.3.1 the name of the catalyst needed (1)

7.3.2 The IUPAC name of compound X (1)

7.4 Name the type of reaction represented by reaction 4. Once again state addition, substitution or elimination and then the specific type. (2)

7.5 Both Reactions 3 and 4 take place in the presence of an inorganic reagent.

7.5.1 Name the type of reaction represented by Reaction 3. (2)

7.5.2 Write down the TWO reaction conditions which would favour Reaction 3 instead of Reaction 4. (2)

[11]

Ensure to do the next worksheet (second half of the test)