

This file was downloaded from the American Curriculum website



الملف Important math exam

[Almanahj Website](#) → [American curriculum](#) → [1st Grade](#) → [Math](#) → [Term 1](#) → [The file](#)

More files for 1st Grade , Subject Math , Term 1

<a href="#">Important math exam</a>	1
<a href="#">Worksheet about less and greater number</a>	2
<a href="#">Worksheet about even and odd number</a>	3
<a href="#">Worksheet about Plural</a>	4
<a href="#">Mathematics review test</a>	5
<a href="#">Worksheet about number pair in math</a>	6
<a href="#">Worksheet about Ordinal Numbers</a>	7





Full Name: ..... Subject : .....  
Class : ..... Attendance List: ..... Date : .....

Please Retype This Sentence: "I am honest Kid. I'll do the best for Allah"

● *Bismillahirrahmaanirrahim* ●

1) Count the object and type your answer in the box.



2) Type the following numbers **in words**.




3) Fill the missing numbers.




4) Here are Hasan's cookies.



Umar has the same number as Hasan's. Click the correct picture of Umar.



5) Hana wants to make fruits salad. She needs more than 4 apples. Click the correct box of apples.





6) Click all numbers that are smaller than 5.



7) Count from right and click the second plant.



8) Choose the position of the brown leaf.



The **green leaf** is in the \_\_\_\_\_ from left.

9) Write the following numbers *in words*.

7<sup>th</sup>       1<sup>st</sup>

10) Drag and drop the objects.

**Count from left.**

The bag is in the first.

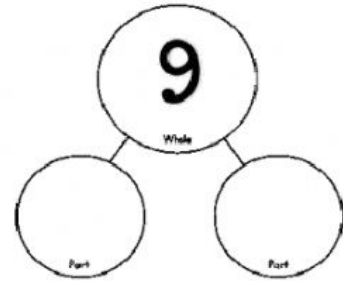
The bottle is in the second.

The bag is in the third.



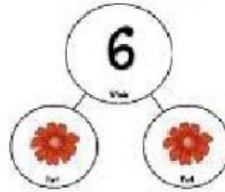



11) Write the missing numbers.



4 and \_\_\_\_\_ make 9

12) What does  stand for?



 stands for \_\_\_\_\_


13) Type two pairs of numbers that make 8.



\_\_\_\_\_ and \_\_\_\_\_

\_\_\_\_\_ and \_\_\_\_\_

14) Aminah has 7 muffins and two plates.

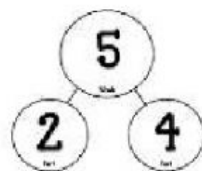


How can she put all the muffins on the two plates? List two possible ways.

\_\_\_\_\_ and \_\_\_\_\_

\_\_\_\_\_ and \_\_\_\_\_

15) Is this correct? Choose 'YES' or 'NO'.



YES

NO

16) Swap the order of the numbers to add.

$$4 + 2 + 1 = 7$$

$$2 + \underline{\quad} + \underline{\quad} = 7$$





17) Find the sum of 4 and 3.



Count on to find the sum.

4			
---	--	--	--



18) Mother buys 6 apples and 2 durians.

How many fruits does mother buy **altogether**?

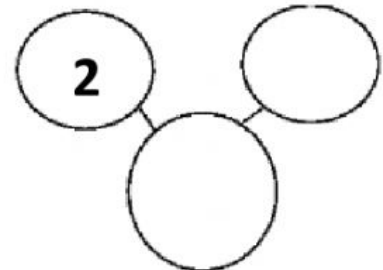


	+		=	
--	---	--	---	--

Mother buys \_\_\_\_\_ fruits altogether.

19) There are 5 eggs altogether but two are broken.

Fill the missing number.



20) What is the difference between 4 and 6?



The difference is \_\_\_\_\_ .

21) There are 7 fish.

Fatih eats 3 fish.

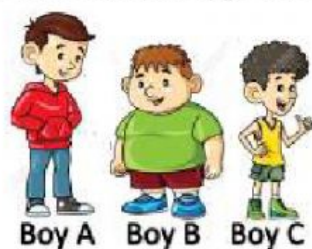
How many fish are still **left**?

	-		=	
--	---	--	---	--

There are still \_\_\_\_\_ fish left.



22) Which boy is the tallest? Type A, B or C in the box.

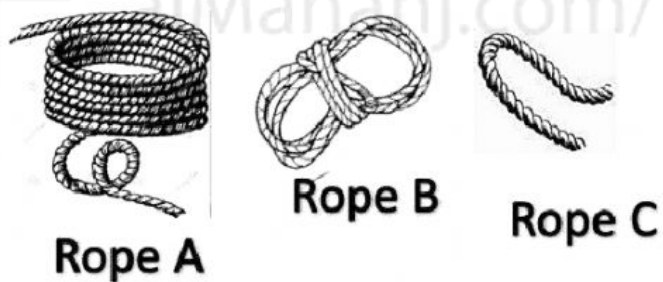


**Boy** is the tallest.

23) Click the taller kid.



24) Type A, B or C the shortest rope.



The shortest rope is \_\_\_\_\_

25) Tick (✓) the heavier object

