

This file was downloaded from the American Curriculum website



TEST SCIENCE SEMESTER SECOND الملف

[Almanahj Website](#) → [American curriculum](#) → [4th Grade](#) → [Science](#) → [Term 1](#) → [The file](#)

More files for 4th Grade , Subject Science , Term 1

Worksheet about Vibrations and Sound	1
Worksheet about Stars and galaxies	2
Worksheet about Thirs law of newton	3
SECOND SEMESTER SCIENCE TEST	4
Last term science Examination	5
Science Review Test	6
Worksheet about Science DLP	7



MATH

LAST TERM EXAMINATION

Last Semester, June 2022

Academic Year of 2021/2022

Name : _____

Class : _____

Teacher's Email :
elisyahmatshuri@gmail.com

I. **Choose A, B, or C for the best answer.**
(10 Points)

1. 5 metres (m) = cm

- a. 50
- b. 500
- c. 550

2. 2 kilometres (km) = m

- a. 12
- b. 20
- c. 2.000

3. 6 kilometres (km) = m

- a. 6.000
- b. 60
- c. 160

4. 8 kilograms (kg) = g

- a. 80
- b. 8.000
- c. 85

5. 6.000 grams (g) = kg

- a. 16
- b. 6
- c. 60


II. **Cross (X) S if each of the following shapes is SYMMETRICAL. and AS if it is ASYMMETRICAL. (10 points)**



1. S AS



2. S AS



3. S

AS

4. S

AS

5. S

AS

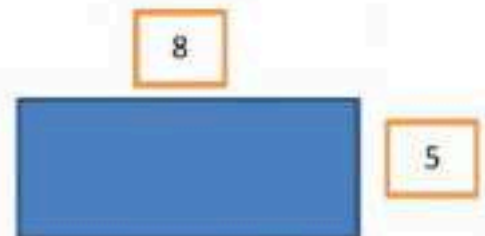
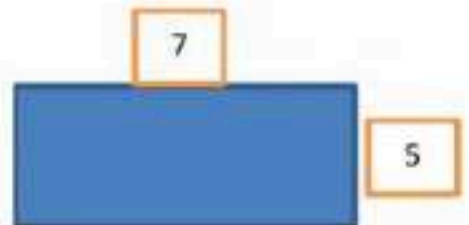
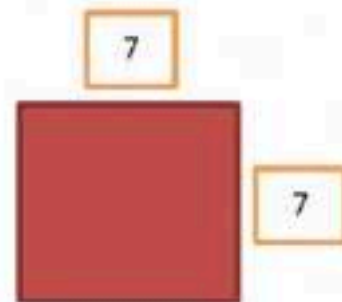
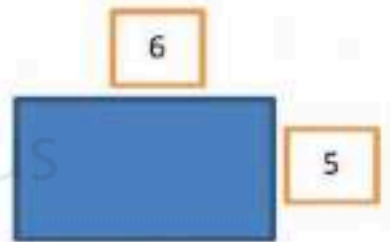
III. Answer the questions below!

1. What is the perimeter of this rectangle?

2. What is the perimeter of this square?

3. What is the perimeter of this rectangle?

4. What is the area of this rectangle?



DOWNLOAD MORE

FROM

alManahj.com/us

5. What is the area of this square?

