


This file was downloaded from the American Curriculum website



الملف Worksheet about The System and Structure of the Earth

[Almanahj Website](#) → [American curriculum](#) → [9th Grade](#) → [Geology](#) → [Term 1](#) → [The file](#)

More files for 9th Grade , Subject Geology , Term 1

Worksheet about The Earth	1
Worksheet about Internal Structure of the Earth	2
Worksheet about Resources in the ocean	3
Worksheet about Saving the Earth	4
Worksheet about Layers of the Earth	5

CHAPTER 9: EARTH

9.1 The System and Structure of the Earth

1. The earth system has four main components that copy in relation to each other. Match the correct answers to the components of the earth.



GEOSPHERE

BIOSPHERE

HIDROSPHERE

ATMOSPHERE

--	--	--	--

2. Drag and drop the answer choices below to the correct earth component box above.

LIFE ZONES CONSISTING OF HUMANS, ANIMALS, PLANTS AND MICROORGANISMS

AIR ZONE COVERING THE EARTH'S SURFACE

WATER ZONE (RIVER, LAKE, OCEAN)
ICE IN THE GROUND AND WATER VAPOR IN THE ATMOSPHERE

Rock and soil zone on Earth's surface

3. Fill in the blanks with the correct atmospheric stratification.

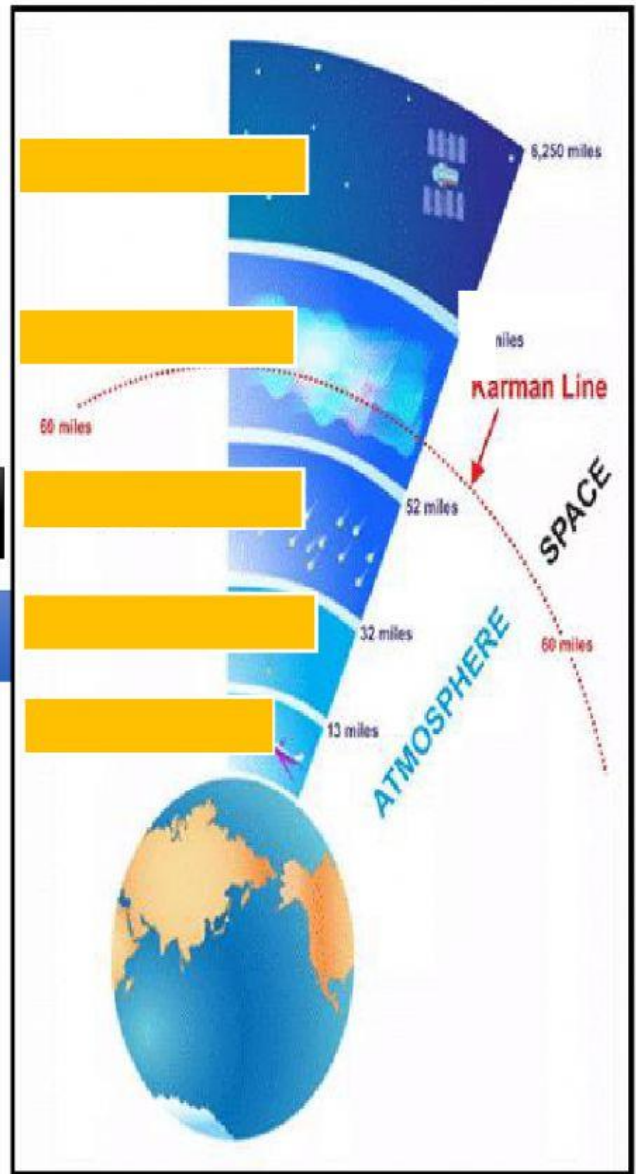
Communication satellites that orbit the earth

Aurora takes place here

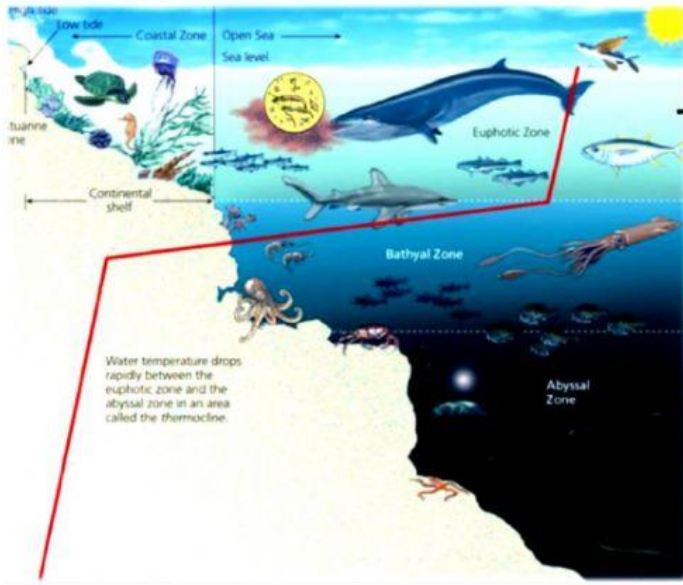
The burning and destruction of meteorites occurs

This layer is suitable and stable for airplane flight.

This layer contains living things that breathe, the wind blows, clouds, rain and snow form.



4. Stratification in the ocean has 3 zones according to the characteristics of different marine life. **Choose the correct answer.**



[Blank blue box for answer]

[Blank blue box for answer]

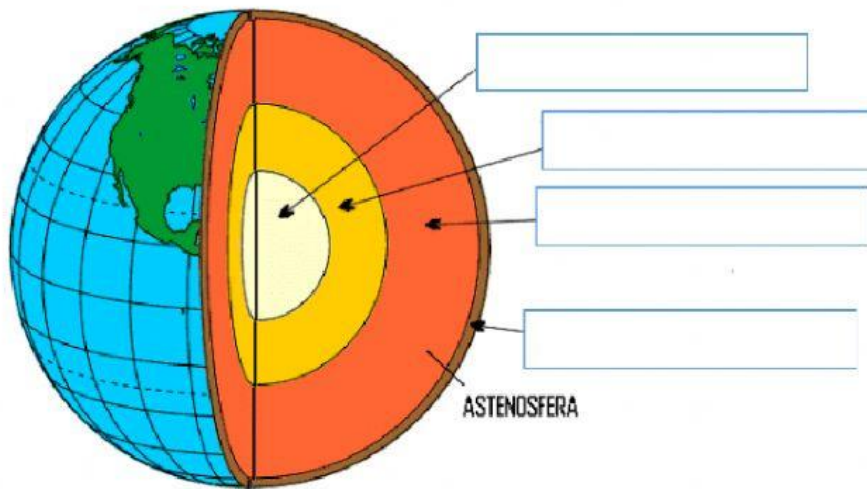
[Blank blue box for answer]

5. **Drag and drop** the correct life according to the ocean stratification.

ZONE	TYPE OF ANIMAL
<ul style="list-style-type: none"> No light reaches Animal body shines/glows in the dark 	
<ul style="list-style-type: none"> The water is very shallow Light is permeable Suitable for plant habitat 	
<ul style="list-style-type: none"> Plants are difficult to live Habitat of large marine animals (giant squid, whales) 	

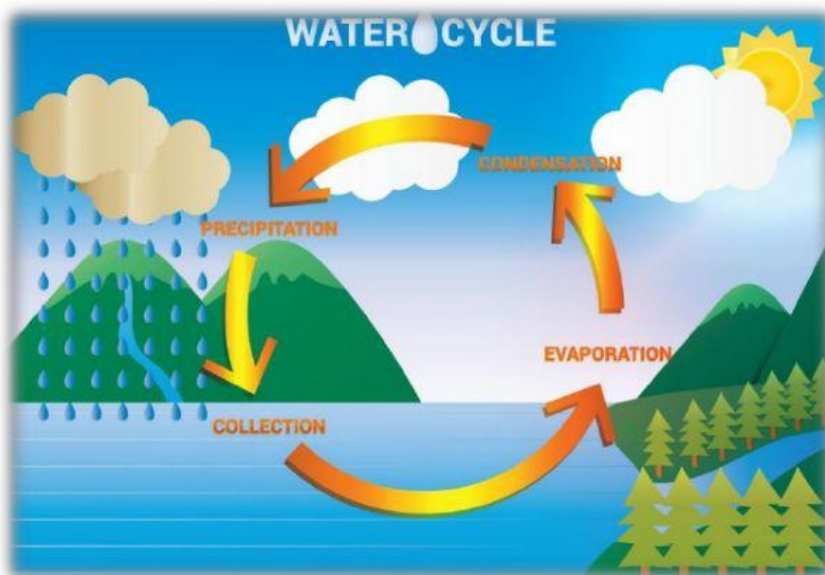


6. Label the following layers of the earth using the 'drag and drop' method.



- INNER CORE
- OUTER CORE
- CRUST
- MANTLE

7. DISTRIBUTION OF WATER ON EARTH. CHOOSE THE CORRECT ANSWER.



- Water cycle process is
- Total amount of water is always