

This file was downloaded from the American Curriculum website



الملف Worksheet about practice solve addition word problems

[Almanahj Website](#) → [American curriculum](#) → [3rd Grade](#) → [Math](#) → [Term 1](#) → [The file](#)

More files for 3rd Grade , Subject Math , Term 1

Worksheet about Addition properties	1
Worksheet about Math Review 2	2
Fractions in Simplest Form	3
Examen Math	4
Worksheet about Math Review	5
Worksheet about Revision and Mental addition and Mental subtraction	6
Worksheet about shapes and time	7



Unit 2: Addition and subtraction

Lesson 2: Word problems

I. Vocabulary

Vocabulary	Vietnamese meaning
Sum	Tổng

II. Form

Form	Example
The sum of ... and ... is ...	$12 + 11 = 23$ The sum of <u>12</u> and <u>11</u> is <u>23</u>

III. Exercises

1. Complete.

a. $43 + 37 = \underline{80} \Rightarrow$ The sum of 43 and 37 is 80.

b. $25 + 67 = \underline{\quad} \Rightarrow$ The sum of and is .

c. $31 + 28 = \underline{\quad} \Rightarrow$ The sum of and is .

2. Read and answer each question.

a. Jane has **37 books** and John has **54 books**. How many books do they have in **total**?

 + = (books)



b. There are 37 girls and 25 boys in the bus. How many kids are there **altogether**?

$$\boxed{} + \boxed{} = \boxed{} \text{ (kids)}$$



3. Complete.

a. What is the sum of 50 and 28?

⇒ The sum of 50 and 28 is 78.

b. What is the sum of 37 and 54?

⇒ The sum of 37 and 54 is $\boxed{}$.




c. What is the sum of 39 and 58?

⇒ The sum of $\boxed{}$ and $\boxed{}$ is $\boxed{}$.

4. Complete.

How much?

 \$ $\boxed{}$	 \$ $\boxed{}$	 \$ $\boxed{}$
--	--	--