

This file has been downloaded from the Almanahj website



The file: PythagoreanTheorem worksheet

[Almanahj Website](#) ⇒ [American curriculum](#) ⇒ [7th Grade](#) ⇒ [Math](#) ⇒ [Term 1](#)

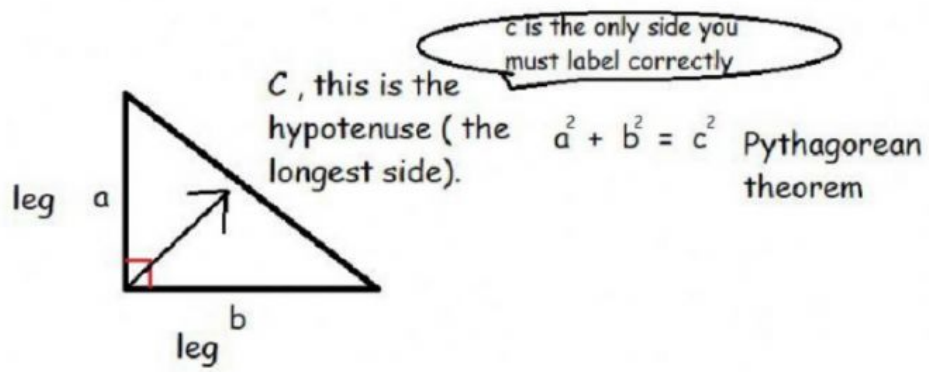
More files for: 7th Grade subject Math - Term 1

[Rational Numbers worksheet](#)

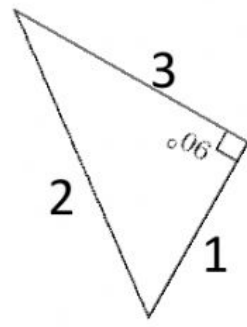
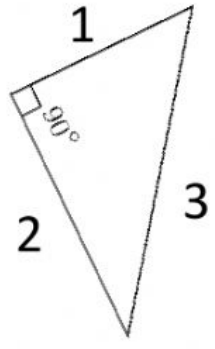
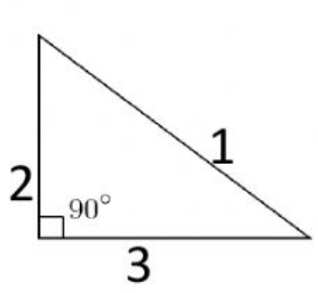
1

[Solve Equations worksheet](#)

2

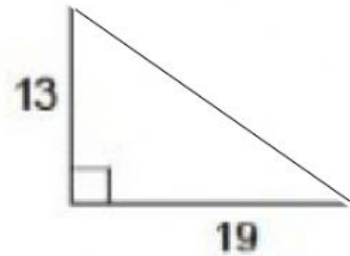

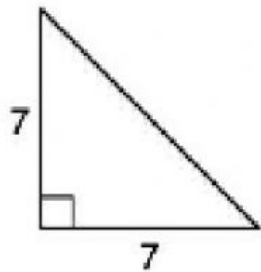


Which side length is the hypotenuse?



How do you know?

Use Pythagorean Theorem to find the hypotenuse of the triangles below. Show your work. Round to the nearest whole number.



Find the missing Side Length. Show your work. Round to the nearest whole number.

