


This file was downloaded from the American Curriculum website



Shadow about Worksheet الملف

[Almanahj Website](#) → [American curriculum](#) → [2nd Grade](#) → [Science](#) → [Term 1](#) → [The file](#)

More files for 2nd Grade , Subject Science , Term 1

<a href="#">Worksheet about Storing the Components</a>	1
<a href="#">Worksheet about Disassemble and Store Model</a>	2
<a href="#">Worksheet about Components and Illustrated Manual</a>	3
<a href="#">Worksheet about Mixture</a>	4
<a href="#">Worksheet about balanced diet</a>	5
<a href="#">Worksheet about Health and body</a>	6
<a href="#">Worksheet about science review</a>	7

# SHADOW

DOWNLOAD MORE

Which of these are light sources?

A




B




C



D



E



How many shadow can you see?



• One




• Two



• Three



Which one is incorrect?



- A. bike
- B. girl
- C. tree
- D. All





**These objects are not light sources.**

**T**

**F**