

This file was downloaded from the American Curriculum website



Practice Math about Worksheet الملف

[Almanahj Website](#) → [American curriculum](#) → [1st Grade](#) → [Math](#) → [Term 1](#) → [The file](#)

More files for 1st Grade , Subject Math , Term 1

Worksheet about Math Activity	1
Worksheet about Addition and subtraction and Numbers up to 10000	2
Worksheet about Rounding off and Ordering and Comparing Numbers and Ordinal Numbers	3
End of math Unit Test	4
Worksheet about numbers Ones and tens	5
Important math exam	6
Worksheet about less and greater number	7



Math practice

Machito



1. Mark the circle showing one-half dozen of a group.


a)



b)




c)



d)



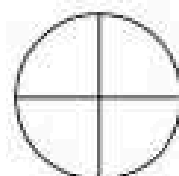
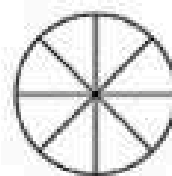
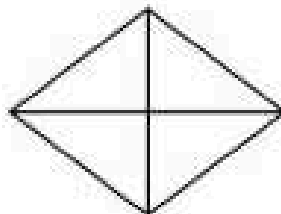

2. Mark the circle under the ruler that shows the centimeters.



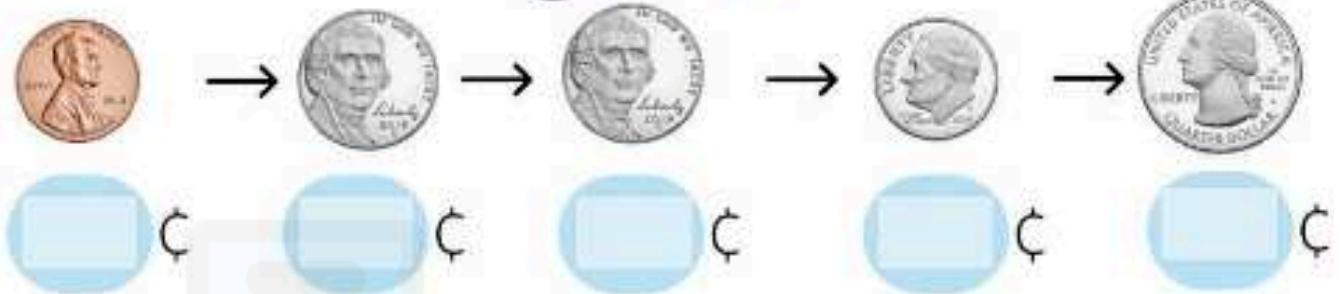
3. Mark the circle under the ruler that shows the inches.



4. Mark the circles under the objects that is divided into fourths.



5. How many cents?



DOWNLOAD MORE
FROM

6. Resolve the following problems:

a) Captain Amelia had six Treasure Planet maps. Mr Arrow had four maps. How many more maps did Captain Amelia have than Mr Arrow?



b) Long John sword is seven inches long. Jim's sword is three inches long. How much longer is Long John's sword than Jim's sword?



c) B.E.B found six coins. Mr Doppler found four coins too. How many coins did they find altogether?



$$\square + \square + \square = \square$$

DOWNLOAD MORE


7. Write the sums and differences.

alManahi.com/us

$\begin{array}{r} 3 \\ 2 \\ + 3 \\ \hline \square \end{array}$	$\begin{array}{r} 9 \\ + 7 \\ \hline \square \end{array}$	$\begin{array}{r} 7 \\ - 4 \\ \hline \square \end{array}$	$\begin{array}{r} 3 \\ - 3 \\ \hline \square \end{array}$	$\begin{array}{r} 2 \\ 6 \\ + 1 \\ \hline \square \end{array}$
$\begin{array}{r} 9 \\ - 3 \\ \hline \square \end{array}$	$\begin{array}{r} 9 \\ - 4 \\ \hline \square \end{array}$	$\begin{array}{r} 1 \\ 4 \\ + 5 \\ \hline \square \end{array}$	$\begin{array}{r} 2 \\ 1 \\ + 4 \\ \hline \square \end{array}$	$\begin{array}{r} 0 \\ 7 \\ + 2 \\ \hline \square \end{array}$



8. What time is it?

 : :

DOWNLOAD MORE
FROM

 : : 