

This file was downloaded from the American Curriculum website



100 ,10 by dividing and Multiplying Sequences Timetables Time about Worksheet الملف

[Almanahj Website](#) → [American curriculum](#) → [1st Grade](#) → [Math](#) → [Term 1](#) → [The file](#)

More files for 1st Grade , Subject Math , Term 1

Worksheet about Linear and non linear sequences	1
Worksheet about Place Value Chart	2
Worksheet about Comparing number	3
Worksheet about Math Problem	4
Worksheet about Addition and number pair	5
Worksheet about Math Practice	6
Worksheet about Math Activity	7

Primary Math Stage 4 - Unit 1 and 2 - Internal assessment

Name:		Class:		Date:	
-------	--	--------	--	-------	--

1. Answer the questions below: [3pts]

Jon counts back in steps of 10. He starts at 437. What is the next number he says?	
Cloe counts on in steps of 1000. She starts at 3254. What is the next number she says?	
David counts on in steps of 100. He starts at 856. What is the next number he says?	

2. Write the temperature: [3pts]

The temperature in HCMC is 32°C. What are the temperatures in these other countries?	
The temperature in London is 21°C colder:	°C
The temperature in Paris is 15°C colder:	°C
The temperature in Mumbai is 4°C warmer:	°C

3. Write these numbers in digits: [3pts]

Ten thousand, three hundred and twenty-one	
Four hundred and thirty-one thousand, six hundred and eighty-nine	
Seven hundred and four thousand and eighty-eight	

4. Circle the correct answer [4pts]

Which of these numbers is 10 times larger than two hundred and thirty?	2300 23
Which of these numbers is 100 times larger than forty-six thousand, two hundred and nine?	462,090 4,620,900




Primary Math Stage 4 - Unit 1 and 2 - Internal assessment

$654 \times \quad = 65400$	10 100
$870 \div \quad = 87$	10 100

5. Answer the questions below: [4pts]

seconds hours weeks months years minutes	
There are 12 of these in a year:	
A maths lesson lasts 35 of these:	
I sleep for 8 of these every night.	
There are 60 of these in a minute:	

6. Write the 12 hour and 24 hour times: [3pts]

Clock			
Time of day	Morning	Evening	Afternoon
12 hour clock			
24 hour clock			

7. Place the children in order based on their time in the race [4pts]

Heather - 99 seconds Henri - 1 minute 10 seconds Claire - 73 seconds Alice - 1 minute 44 seconds			
1st	2nd	3rd	4th

8. Look at the bus timetable below and answer the questions [6pts]

Primary Math Stage 4 - Unit 1 and 2 - Internal assessment

Train timetable			
	Train 1	Train 2	Train 3
Hightown	9.10 a.m.	10.05 a.m.	11.00 a.m.
Newbridge	9.25 a.m.	10.20 a.m.	11.15 a.m.
Bridgetown	9.50 a.m.	10.45 a.m.	11.40 a.m.
Donbury	10.00 a.m.	10.55 a.m.	11.50 a.m.

DOWNLOAD MORE FROM alManahj.com/us

If you take the 9:10am train from Hightown, how long would it take to get to Donbury?	
Which is longer, the journey from Hightown to Newbridge or the journey from Bridgetown to Donbury?	
Which train leaves Newbridge at 10:20 am?	
How long does it take to go between Newbridge and Bridgetown on Train 3?	
If you miss the 10:05am train at Hightown, when is the next train?	
Mr. Jon arrives at Bridgetown station at 10:00am. Which is the earliest train he can catch to Donbury?	

Remember to check your answers!!

Score:	Teacher comment:
/30	