

This file was downloaded from the American Curriculum website



الملف Triangles about Worksheet

[Almanahj Website](#) → [American curriculum](#) → [4th Grade](#) → [Math](#) → [Term 1](#) → [The file](#)

More files for 4th Grade , Subject Math , Term 1

Worksheet Mental Maths	1
Worksheet about Review math for mid term 2	2
Worksheet about Math Revision	3
Worksheet about adding numbers	4
Worksheet about Complete patterns	5
Worksheet about revision final test	6
TitleWorksheet about multiply numbers	7



UNIT 9: 2D and 3D SHAPES

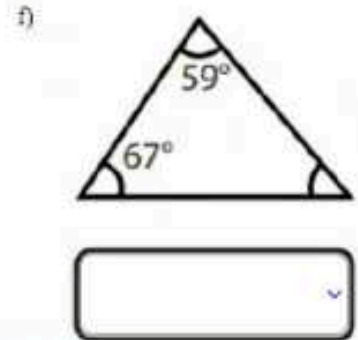
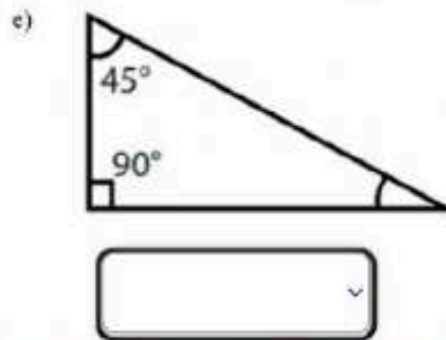
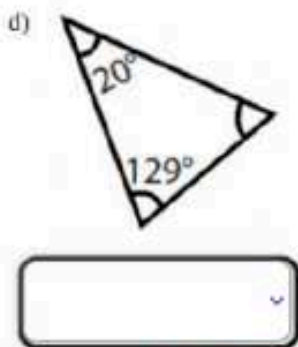
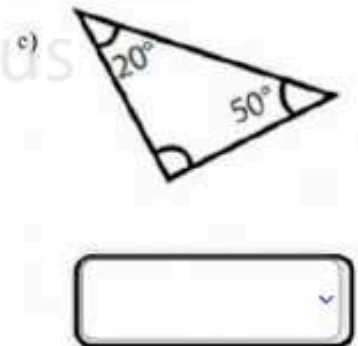
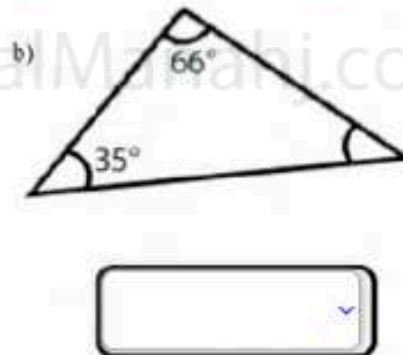
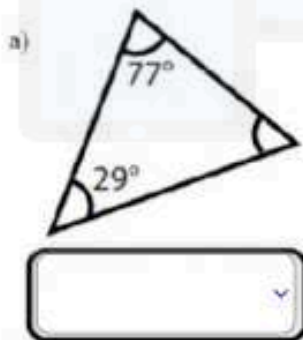
Lesson 3: Types of triangles (Cont.)

II. Vocabulary:

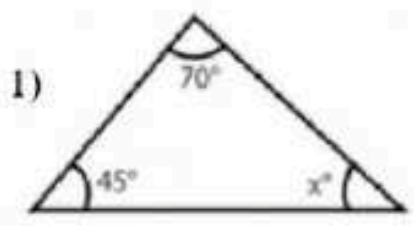
English words	Vietnamese meaning
Measurement	Độ đo
Degree	Độ

I. Practice:

1. Find the measurement of each unknown angle in the given triangles:

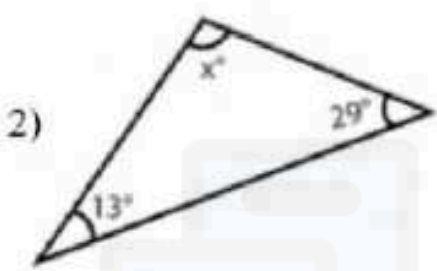


2. Write down the type of each angle after finding its measurement.



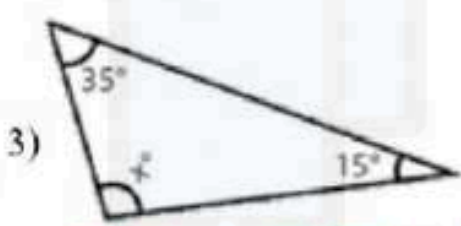
$x^\circ =$

It is an angle.



$x^\circ =$

It is an angle.



$x^\circ =$

It is an angle.

DOWNLOAD MORE
FROM

Manah.com

