

This file has been downloaded from the Almanahj website




The file: Area of the compound shapes

[Almanahj Website](#) ⇒ [American curriculum](#) ⇒ [8th Grade](#) ⇒ [Math](#) ⇒ [Term 1](#)

More files for: 8th Grade subject Math - Term 1

<a href="#">number PATTERN AND SEQUENCE</a>	1
<a href="#">Averages &amp; Frequency Diagrams</a>	2
<a href="#">maths cube worksheet</a>	3
<a href="#">Worksheet the volumes and surface areas of cuboids</a>	4
<a href="#">Worksheets geometry the triangle</a>	5
<a href="#">The areas of compound shapes</a>	6
<a href="#">Volume and surface area</a>	7

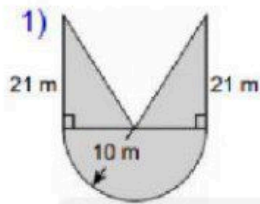
Social Media links for 8th Grade



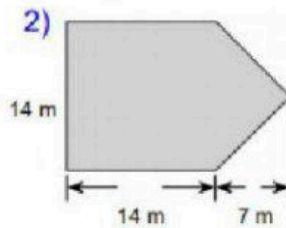
## Compound shape

<b><math>37 \text{ m}^2</math></b>	<b><math>245 \text{ m}^2</math></b>	<b><math>367.1 \text{ m}^2</math></b>
<b><math>189 \text{ cm}^2</math></b>	<b><math>212.7 \text{ cm}^2</math></b>	<b><math>196.5 \text{ m}^2</math></b>
<b><math>231.3 \text{ cm}^2</math></b>	<b><math>200.5 \text{ cm}^2</math></b>	<b><math>228.5 \text{ m}^2</math></b>

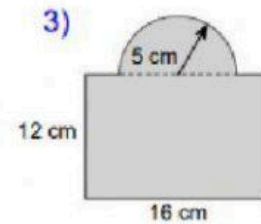
Find the area of each figure, round your answer to one decimal place if necessary.



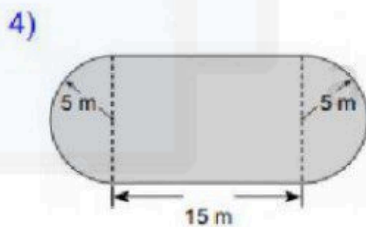
Area: \_\_\_\_\_



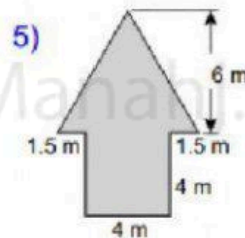
Area: \_\_\_\_\_



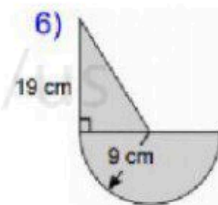
Area: \_\_\_\_\_



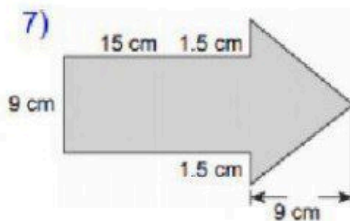
Area: \_\_\_\_\_



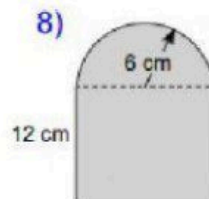
Area: \_\_\_\_\_



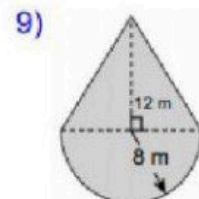
Area: \_\_\_\_\_



Area: \_\_\_\_\_



Area: \_\_\_\_\_



Area: \_\_\_\_\_