

أوراق عمل الوحدة Geometry 13 Unit الهندسة منهج ريفيل



تم تحميل هذا الملف من موقع المناهج الإماراتية

موقع المناهج ← المناهج الإماراتية ← الصف الخامس ← رياضيات ← الفصل الثالث ← ملفات متنوعة ← الملف

تاريخ إضافة الملف على موقع المناهج: 2025-05-21 21:42:00

ملفات اكتب للمعلم اكتب للطالب | اختبارات الكترونية | اختبارات | حلول | عروض بوربوينت | أوراق عمل
منهج انجليزي | ملخصات وتقارير | مذكرات وبنوك | الامتحان النهائي | للمدرس

المزيد من مادة
رياضيات:

التواصل الاجتماعي بحسب الصف الخامس



صفحة المناهج
الإماراتية على
فيسبوك

الرياضيات

اللغة الانجليزية

اللغة العربية

التربية الاسلامية

المواد على تلغرام

المزيد من الملفات بحسب الصف الخامس والمادة رياضيات في الفصل الثالث

حل تجميعية تدريبات شاملة كامل الهيكل الوزاري

1

تجميعية تدريبات شاملة كامل الهيكل الوزاري

2

تجميعية شاملة صفحات الكتاب وفق الهيكل الوزاري بدون الحل

3

تجميعية أسئلة مراجعة وفق الهيكل الوزاري منهج ريفيل

4

تجميعية أسئلة تدريبات الكتاب وفق الهيكل الوزاري منهج بريدج

5

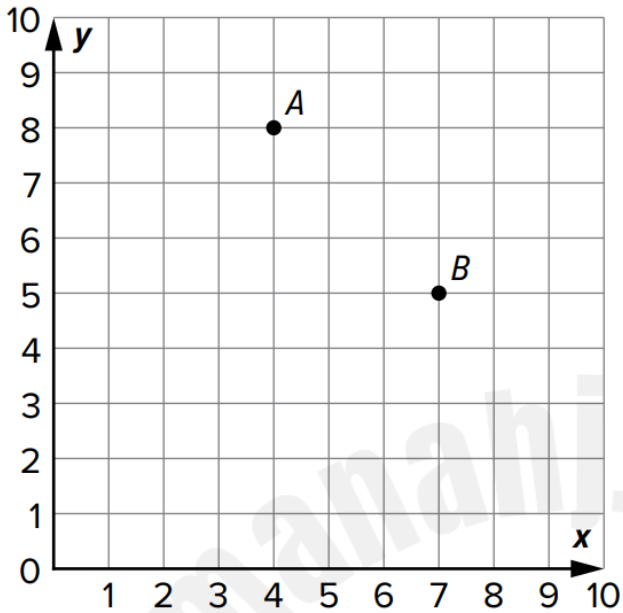
Name :

Unit 13 Review

Geometry

Lesson 1 (Understand the coordinate plan) :

1. Use the coordinate plane to answer the questions.



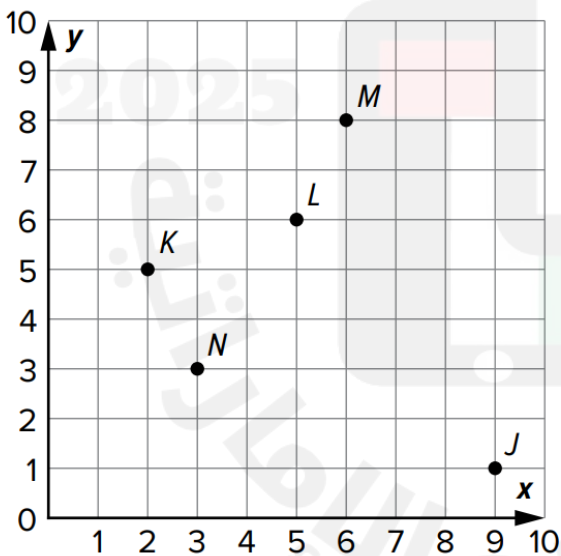
What ordered pair represents point A?

(_____ , _____)

What ordered pair represents point B?

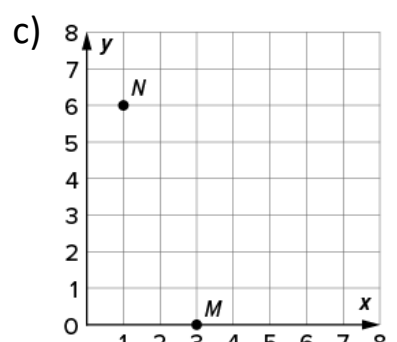
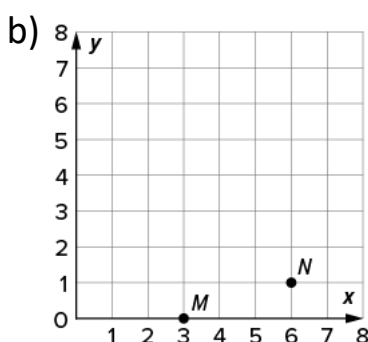
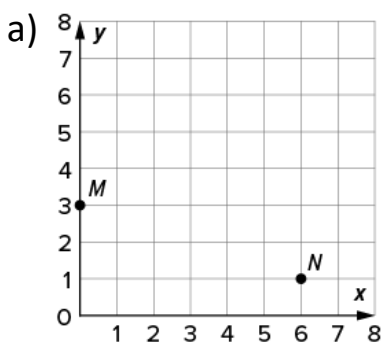
(_____ , _____)

2. Choose whether the ordered pair for each point is Correct or Not Correct.



	Correct	Not Correct
Point J (9, 1)		
Point K (2, 5)		
Point L (6, 5)		
Point M (8, 6)		
Point N (3, 3)		

- 3) Which coordinate plane shows the points M (0, 3) and N (6, 1) plotted correctly?



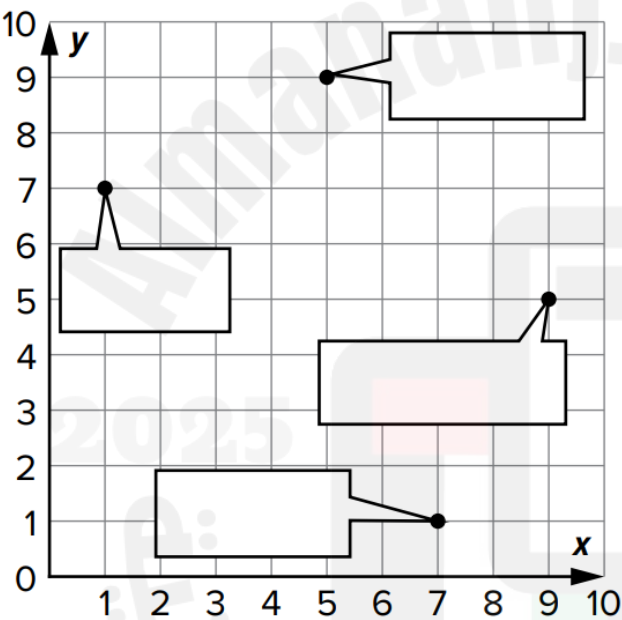
Lesson 2 (Plot ordered pairs on the coordinate plane) :

1. How can you plot the point (5, 2) on a coordinate plane?
- Start at the _____.
- Move _____ units to the right.
- Move _____ units up.

2. Chris uses the table to make a map of where his favorite zoo animals are located.

Favorite Zoo Animals			
Alligator	Gorilla	Iguana	Tiger
(9, 5)	(7, 1)	(5, 9)	(1, 7)

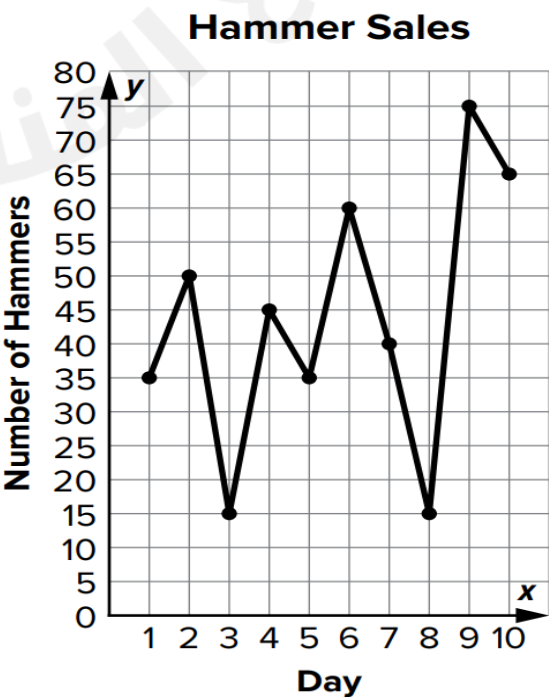
Label the animal to the correct point on the coordinate plane to show the location of each zoo animal.



Lesson 3 (Represent problems on a coordinate plane) :

Autumn keeps track of how many hammers she sells at her hardware store over a 10-day period. She plots the data on a coordinate plane.

1. On which day were the most hammers sold?
- A.** Day 3 **B.** Day 6
- C.** Day 9 **D.** Day 75
2. How many more hammers were sold on Day 6 than on Day 5?
- A.** 5 **B.** 25
- C.** 35 **D.** 60

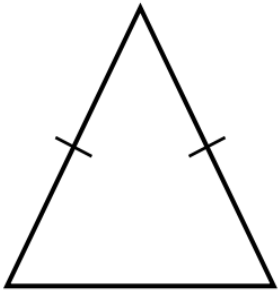


Lesson 4 (Classify triangles by properties) :

1. Damien draws a triangle that has the length of one side equal to 5 inches, one side that has a length that is less than 5 inches, and one side that has a length that is greater than 5 inches. Which best describes Damien's triangle?

A. scalene **B.** isosceles **C.** equilateral

2. Mia drew the triangle shown.



Which best describes Mia's triangle?

A. scalene **B.** isosceles **C.** equilateral

3. Ned draws a triangle so that all of the sides have the same length. Which describes Ned's triangle? Choose all that apply.

- A.** The triangle is scalene.
B. The triangle is isosceles.
C. The triangle is equilateral.

Lesson 5 (Properties of quadrilaterals) :

1. Elliott draws a 4-sided shape that has two pairs of parallel sides that have the same length, but the lengths of one pair is different from the lengths of the other pair. Which is true about Elliott's shape? Choose all that apply.

- A.** The shape is a quadrilateral.
B. The shape is a trapezoid.
C. The shape is a parallelogram.
D. The shape is a rhombus.
E. The shape is a rectangle.
F. The shape is a square.

Lesson 5 (Properties of quadrilaterals) :

2. Which shapes have two pairs of parallel sides? Choose all that apply.

- A. parallelogram
- B. rhombus
- C. trapezoid
- D. rectangle
- E. triangle
- F. square

3. Which statement is true about a trapezoid? Choose all that apply.

- A. A trapezoid has 4 sides.
- B. A trapezoid has 2 pairs of parallel sides.
- C. A trapezoid has all 4 sides the same length.
- D. A trapezoid has 1 pair of parallel sides.
- E. A trapezoid has 4 right angles.

4) Which statements are true about a rectangle?

Choose all that apply.

- a) A rectangle is also a trapezoid.
- b) A rectangle is also a quadrilateral.
- c) A rectangle is also a parallelogram.
- d) A rectangle is also a rhombus.
- e) A rectangle is also a square.

5) Match each quadrilateral with its figure:

- a) Rectangle.
- b) Parallelogram.
- c) Rhombus.
- d) Square.

