

حل تجميعية أوراق عمل الوحدة الثالثة عشرة منهج ريفيل



تم تحميل هذا الملف من موقع المناهج الإماراتية

موقع المناهج ← المناهج الإماراتية ← الصف الرابع ← رياضيات ← الفصل الثالث ← ملفات متنوعة ← الملف

تاريخ إضافة الملف على موقع المناهج: 15:49:20 2025-05-15

ملفات اكتب للمعلم اكتب للطالب | اختبارات الكترونية | اختبارات | حلول | عروض بوربوينت | أوراق عمل منهج انجليزي | ملخصات وتقارير | مذكرات وبنوك | الامتحان النهائي | للمدرس

المزيد من مادة رياضيات:

إعداد: School Ghaith AI

التواصل الاجتماعي حسب الصف الرابع



صفحة المناهج الإماراتية على فيسبوك

الرياضيات

اللغة الانجليزية

اللغة العربية

التربية الاسلامية

المواد على تلغرام

المزيد من الملفات بحسب الصف الرابع والمادة رياضيات في الفصل الثالث

تجميعية أوراق عمل الوحدة الثالثة عشرة منهج ريفيل بدون الحل

1

تدريبات اختبار practice Test متبوعة بالحل منهج ريفيل

2

ملزمة مراجعة جميع وحدات الفصل بدون الحل

3

حل تجميعية أوراق عمل الوحدة الثانية عشرة منهج ريفيل

4

تجميعية أوراق عمل الوحدة الثانية عشرة منهج ريفيل بدون الحل

5

Al Ghaith School
Cluster 6

G4	Mathematics	Arb translation	Arb translation
----	-------------	-----------------	-----------------

Circle the letter corresponding to the correct answer	
--	--

Question	1		
Sarah bought 2 pounds of bananas. What is THE weight of the bananas in ounces?			
A	32		
B	48		
C	64		
D	80		

Question	2		
What number makes the equation true? ----- quarts = 4 gallons			
A	8		
B	16		
C	24		
D	32		

Question	3		
What number makes the equation true? 3 hours = ----- minutes			
A	180		
B	240		
C	300		
D	360		

Question	4		
What is the missing value?			

Al Ghaith School
 Cluster 6

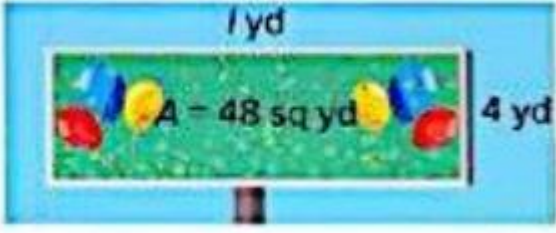
G4	Mathematics	Arb translation	Arb translation
----	-------------	-----------------	-----------------

	<div style="border: 1px solid black; width: 100px; height: 20px; margin: 0 auto; display: flex; align-items: center; justify-content: center;"> <div style="width: 80px; height: 15px; background-color: blue;"></div> <div style="width: 20px; height: 15px; background-color: white; border: 1px solid black;"></div> </div> <p style="text-align: center; margin-top: 5px;">4 ft</p> <div style="width: 150px; height: 40px; background-color: blue; margin: 10px auto;"></div> <p style="text-align: right; margin-top: 5px;">3 ft</p> <p style="text-align: center; margin-top: 20px;">P = ----- ft</p>
A	7
B	10
C	12
D	14

Question	5	
A vine grows $\frac{1}{2}$ ft foot each week. How many inches does it grow in 6 weeks?		
A	48 inches	
B	36 inches	
C	24 inches	
D	3 inches	

Question	6	
A square piece of cardboard has a side length of 8 inches. What is the area of piece of cardboard?		
A	9 square inches	
B	16 square inches	
C	36 square inches	
D	64 square inches	

G4	Mathematics	Arb translation	Arb translation
----	-------------	-----------------	-----------------

Question		7
A billboard has the following measurements. What is the length of the billboard?		
		
A	6	
B	12	
C	8	
D	16	

Question		8
Complete the equation. 11 meters = ----- centimeters		
A	11	
B	110	
C	1,100	
D	11,000	

Working Out Question		
Question		9
The baseball drink 8 gallons of water at a tournament. How many quarts of water do they drink?		
A	36	
B	32	
C	24	
D	16	


G4	Mathematics	Arb translation	Arb translation
----	-------------	-----------------	-----------------

--	--	--

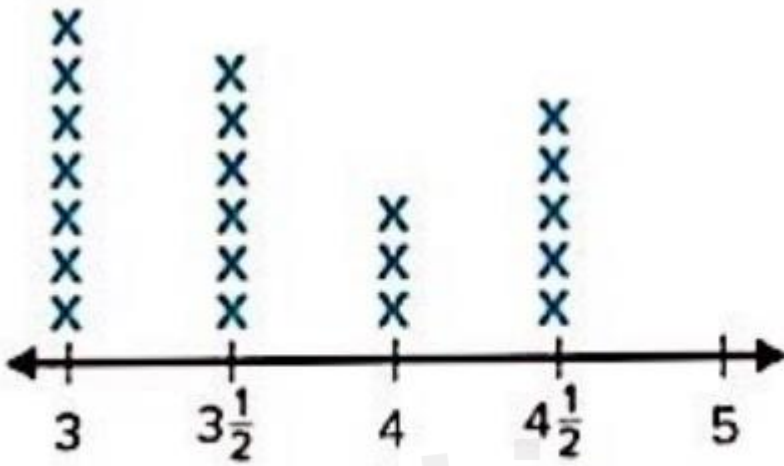
Working Out Question			
Question		10	
Khaled volunteered for 4 hours last weekend? How many minutes did Khaled volunteer?			
A	60		
B	120		
C	180		
D	240		

Question		11	
Salma has 320 centimeters of red ribbon and 6,300 millimeters of blue ribbon. How many more millimeters of blue ribbon than red ribbon does she have?			
A	3,100		
B	5,980		
C	6,620		
D	9,500		
Question		12	
Jasmine worked in the garden from 2:20 P.m. to p.m. how many minutes did she work in the garden?			
A	60		
B	120		
C	260		
D	360		
Question		13	
Khaled volunteered for 4 hours last weekend?			

G4	Mathematics	Arb translation	Arb translation
----	-------------	-----------------	-----------------

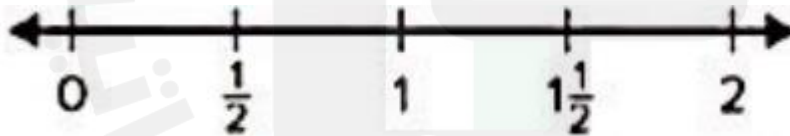
How many minutes did Khaled volunteer?		
A	60	
B	120	
C	180	
D	240	
Question		13
If the width of the blanket is the half the length, what is the area of the blanket?		
		
A	90 square inches	
B	150 square inches	
C	180 square inches	
D	1,800 square inches	
Question		14
A square frame has an area of 400 square inches. What is the side length?		
A	20 in.	
B	10 in.	
C	5 in.	
D	4 in.	
Question		15
Use the line plot. What was the greatest distance jumped?		

G4	Mathematics	Arb translation	Arb translation
----	-------------	-----------------	-----------------

 <p style="text-align: center;">Mr. Cobey's Class Long Jump Distances (ft)</p>			
A	3 ft		
B	$3\frac{1}{2}$ ft		
C	$4\frac{1}{2}$ ft		
D	4 ft		
Question		16	
The table shows the time husam spend practicing the saxophone each day. a) Display the data on a line plot.			

G4	Mathematics	Arb translation	Arb translation
----	-------------	-----------------	-----------------

Saxophone Practice (hours)	
Monday	$1\frac{1}{2}$
Tuesday	0
Wednesday	$\frac{1}{2}$
Thursday	1
Friday	1
Saturday	2
Sunday	$1\frac{1}{2}$



b) How many hours did Husam practice in all?

Question	17		
A rectangle rug has an area of 49 square feet and a width of 7 feet. What is the length and perimeter? Show your work.			

Al Ghaith School
 Cluster 6

G4	Mathematics	Arb translation	Arb translation
----	-------------	-----------------	-----------------

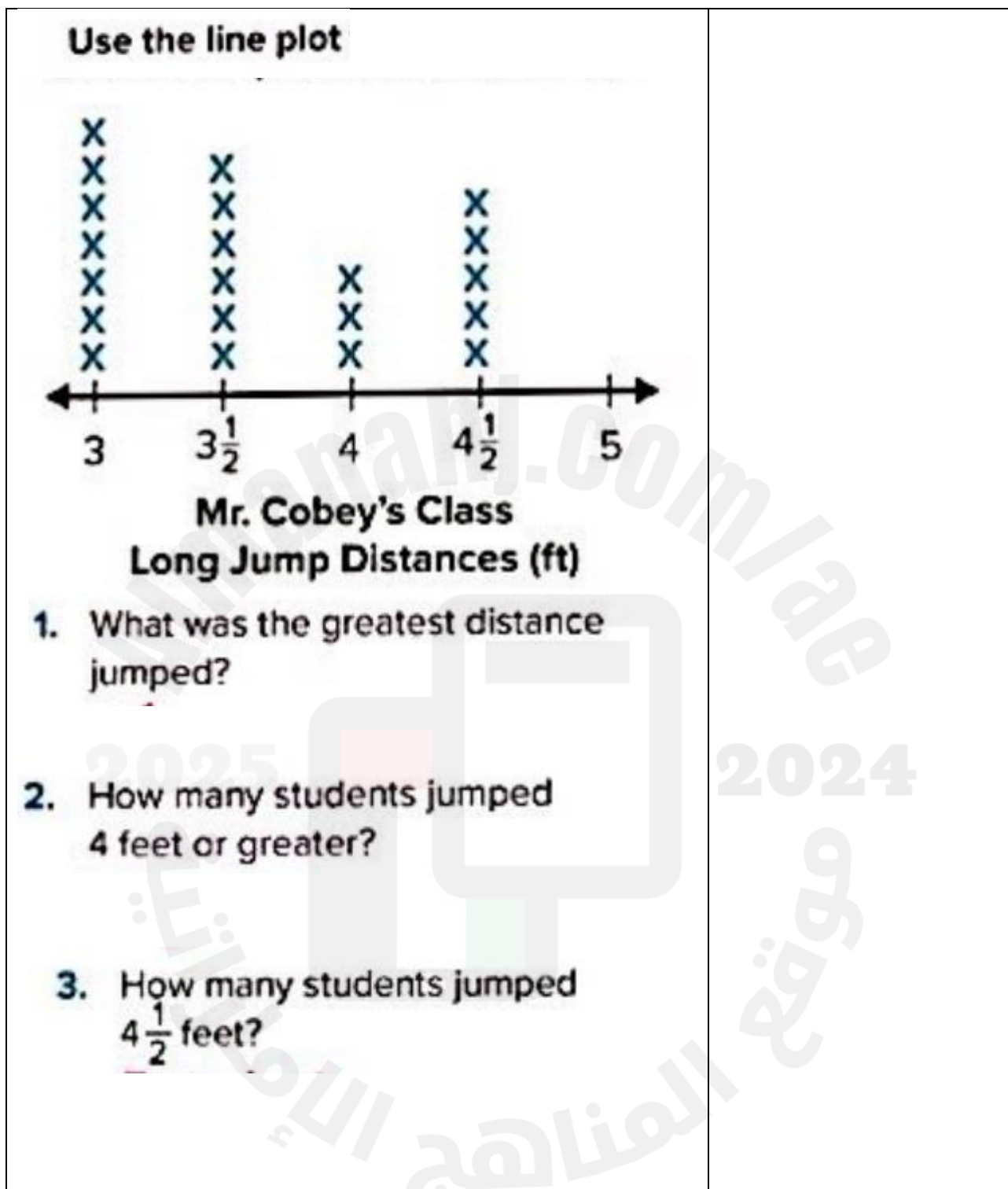
--	--

Question	18		
A rectangle greenhouse has a perimeter of 60 feet and length of 10 feet. What is the width and the area?			

Question	19		
A square frame has an area of 900 square inches. What are the side lengths?			

Question	20	
----------	----	--

G4	Mathematics	Arb translation	Arb translation
----	-------------	-----------------	-----------------



Al Ghaith School
 Cluster 6

G4	Mathematics	Arb translation	Arb translation
----	-------------	-----------------	-----------------

4. How many students jumped $3\frac{1}{2}$ feet?	
--	--

Question		21
A rectangular mat has an area of 15 square feet. The length is 5 feet, what is the width?		
A	10 ft	
B	5 ft	
C	3 ft	
D	32 ft	

Question		21
A rectangular piece of paper has a length of 8 inches. Its perimeter is 32 inches. What is the width of the paper?		
A	8 in.	
B	4 in.	
C	16 in.	
D	20 in.	