

نموذج تدريبي ثالث للاختبار النهائي منهج انسباير متبوع بالإجابات



تم تحميل هذا الملف من موقع المناهج الإماراتية

موقع المناهج ← المناهج الإماراتية ← الصف الرابع ← علوم ← الفصل الثالث ← ملفات متنوعة ← الملف

تاريخ إضافة الملف على موقع المناهج: 19:51:07 2025-05-31

ملفات اكتب للمعلم اكتب للطالب | اختبارات الكترونية | اختبارات | حلول | عروض بوربوينت | أوراق عمل
منهج انجليزي | ملخصات وتقارير | مذكرات وبنوك | الامتحان النهائي | للمدرس

المزيد من مادة
علوم:

التواصل الاجتماعي بحسب الصف الرابع



صفحة المناهج
الإماراتية على
فيسبوك

الرياضيات

اللغة الانجليزية

اللغة العربية

التربية الاسلامية

المواد على تلغرام

المزيد من الملفات بحسب الصف الرابع والمادة علوم في الفصل الثالث

نموذج تدريبي ثان للاختبار النهائي منهج انسباير متبوع بالإجابات

1

نموذج تدريبي أول للاختبار النهائي منهج انسباير متبوع بالإجابات

2

اختبار قصير في الصفحتين 504 - 524 من الهيكل الوزاري

3

تجميعه صفحات الكتاب حسب الهيكل الوزاري منهج بريدج

4

حل تدريبات مراجعة نهائية وفق الهيكل الوزاري

5

Mock Exam Practice for Grade 4 2024-2025

Mock Exam Practice
Grade 4
Term 3

2024-2025

	Name اسم الطالب
	Class الصف
	School المدرسة
	Subject المادة

Notes:

This exam is a practice

Mock Exam Practice for Grade 4 2024-2025

نماذج الأسئلة
Sample Questions

Circle the letter corresponding to the correct answer

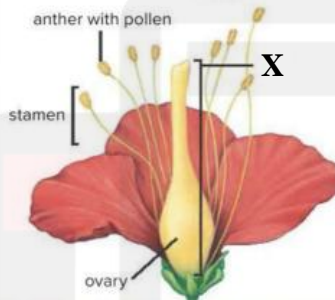
Question 1

Which part of the plant makes most of the plant's food?

- | | |
|---|------------|
| A | The Leaves |
| B | The Stem |
| C | The Flower |
| D | The Roots |

Question 2

The figure below shows a flower part
Which of the following represents letter (X)?



- | | |
|---|------------|
| A | The Pistil |
| B | The Roots |
| C | The Flower |
| D | The Roots |

Mock Exam Practice for Grade 4 2024-2025

Question 3

Which of the following is an internal structure in animals?

A	Fur
B	Lungs
C	scales
D	Beak

Question 4

Which of the following best define the movement of animals from one place to another

A	Mimicry
B	Migration
C	Hibernation
D	Camouflage

Question 5

The brown coat of a deer helps it blend in with its wooded environment. This adaptation is called

A	Mimicry
B	Migration
C	Hibernation
D	Camouflage

Question 6

Which plant part plays the biggest role in supporting the plant?

A	The Leaves
B	The Stem
C	The Flower
D	The Roots

Mock Exam Practice for Grade 4 2024-2025

Question 7

A _____ is a quick reaction that happens without a message from the nervous system

A		Reflex
B		stimulus
C		Respond
D		Tropism

Question 8

Which of the following body parts help the fish to breath



A		Gills
B		Eyes
C		Lungs
D		Nose

Question 9

Nocturnal animals can see better at night because their _____ is dilated and allows more light to reach the back of the eye.

A		Retina
B		Cornea
C		pupil
D		Optic Nerve

Mock Exam Practice for Grade 4 2024-2025

Question 10

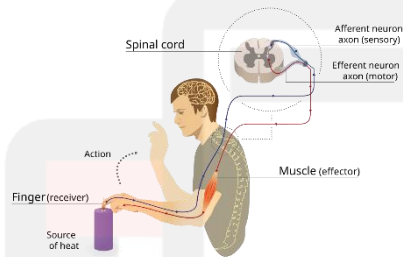
What kind of adoptions does the milk snake have?



- | | |
|---|-------------|
| A | Mimicry |
| B | Migration |
| C | Hibernation |
| D | Camouflage |

Question 11

Which of the following controlling the reflex?



- | | |
|---|-----------------|
| A | The Spinal Cord |
| B | The Brain |
| C | The Finger |
| D | The Lungs |

Mock Exam Practice for Grade 4 2024-2025

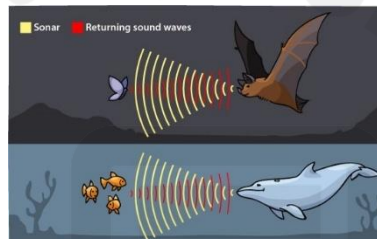
Question 12

Which of the following is the correct path that light travels through the human eye ?

A	Lens → Cornea → Pupil → Retina
B	Cornea → Pupil → Lens → Retina
C	Retina → Lens → Pupil → Cornea
D	Pupil → Cornea → Lens → Retina

Question 13

How do whales, bats, and dolphins make use of echolocation?



A	They use echolocation to help scare away predators.
B	They use echolocation to find food and find their location.
C	They use echolocation to attract mates.
D	They use echolocation to let others of their species know their location.

Question 14

How would having larger eyes benefit a nocturnal animal?

A	The animal's eyes would be able to scare off predators.
B	The animal's eyes would be able to gather more light to see better.
C	The animal's eyes would help allow it to sleep better during the daytime.
D	The animal's eyes would be able to focus easier on shadows in the night.

Mock Exam Practice for Grade 4 2024-2025

Question 15


You walk into a very dark room. What would happen if you turn on a flashlight?

A	The animal's eyes would be able to scare off . I would be able to see objects that are shiny.
B	I would be able to see objects that are illuminated by the beam of light.
C	I would be able to see objects that are opaque.
D	I would be able to see bright colored objects.

Question 16

- Letter A refers to -----
- Letter C refers to -----
- Letter B refers to -----
- Part of the plant that captures light and it's a site for gas exchange

- Part of the plant that supports the plant and transports nutrients and water

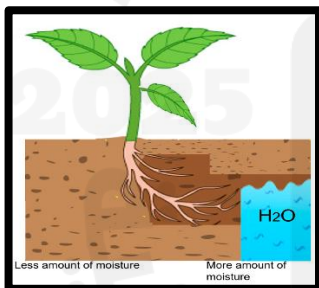



Mock Exam Practice for Grade 4 2024-2025

Question 17

Match and fill the Blank

- The plant's response to water, gravity, light, and touch is **called** -----.



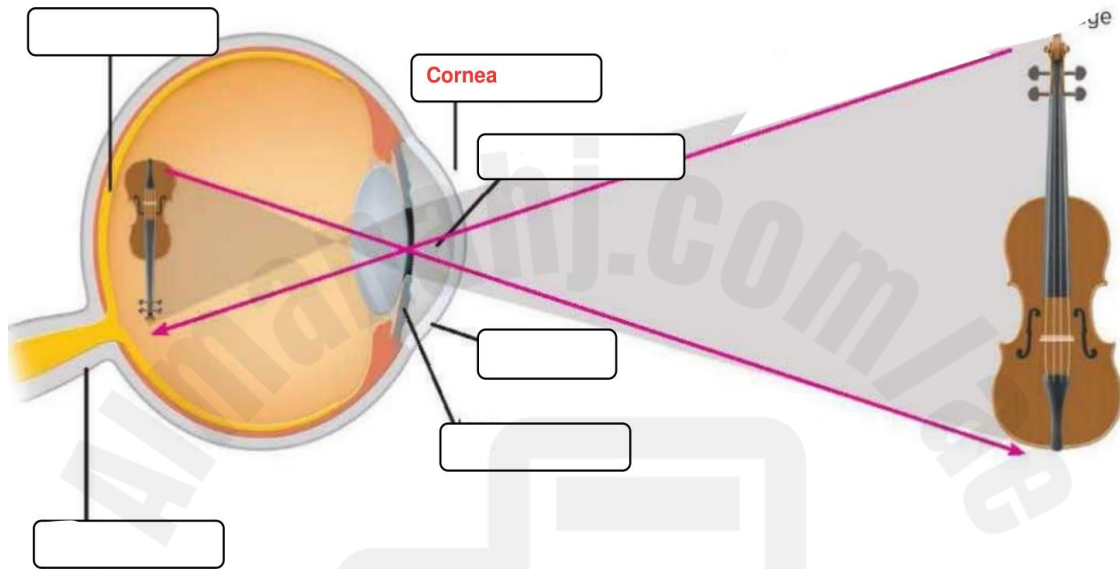
- Phototropism:** Growth response to light.
- Gravitropism (or Geotropism):** Growth response to gravity.
- Hydrotropism:** Growth response to moisture or water.
- Thigmotropism:** Growth response to touch or physical contact.

Mock Exam Practice for Grade 4 2024-2025

Question 18

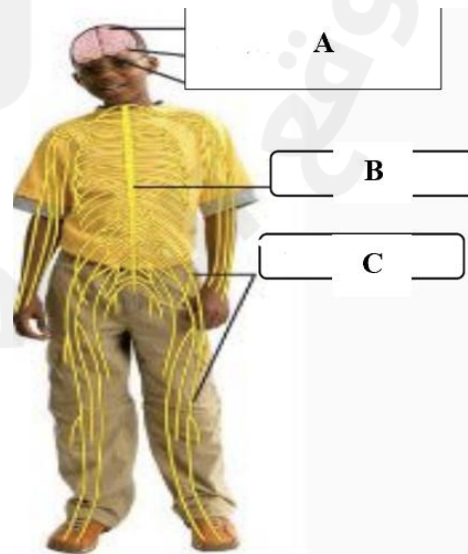
Label the picture

Retina	Cornea	Pupil	Iris	Lens	Optic Nerve
--------	--------	-------	------	------	-------------



Question 19

- Letter A refers to -----
- Letter B refers to -----
- Letter C refers to -----
- The brain and spinal cord are parts of the ----- nervous system.
- Nerves are part of the ----- nervous system.




Mock Exam Practice for Grade 4 2024-2025

دليل الإجابة
Answer Guidelines

الإجابة Answer	رقم السؤال Item
A	1
A	2
B	3
B	4
D	5
B	6
A	7
A	8
C	9
A	10
A	11
B	12
B	13
B	14
B	15

Question 16

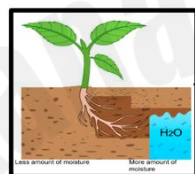
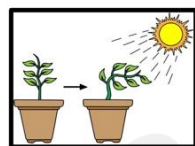
- Letter A refers to **Stem**
- Letter C refers to **Leaves**
- Letter B refers to **Roots**
- Part of the plant that captures light and it's a site for gas exchange
Leaves
- Part of the plant that supports the plant and transports nutrients and water
Stem



Mock Exam Practice for Grade 4 2024-2025

Question 17 Match and fill the Blank

- The plant's response to water, gravity, light, and touch is called **Tropism**



Phototropism: Growth

response to light.

Gravitropism (or

Geotropism): Growth

response to gravity.

Hydrotropism: Growth

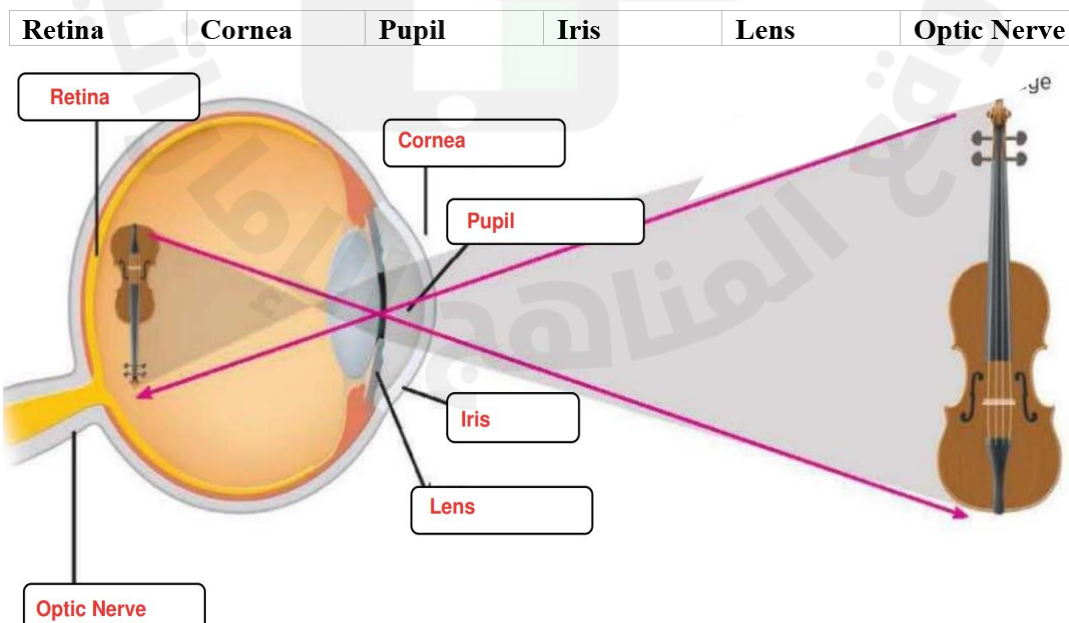
response to moisture or water.

Thigmotropism: Growth

response to touch or physical

contact.

Question 18 Label the picture



Mock Exam Practice for Grade 4 2024-2025

Question 19

- Letter A refers to **Brain**
- Letter B refers to **Spinal Cord**
- Letter C refers to **Nerves**
- The brain and spinal cord are parts of the **Central** nervous system.
- Nerves are part of the **Peripheral** nervous system.

