

نموذج تدريبي أول للاختبار النهائي منهج انسابير متبوع بالإجابات



تم تحميل هذا الملف من موقع المناهج الإماراتية

موقع المناهج ← المناهج الإماراتية ← الصف الثالث ← علوم ← الفصل الثالث ← ملفات متنوعة ← الملف

تاريخ إضافة الملف على موقع المناهج: 2025-05-31 18:58:14

ملفات اكتب للمعلم اكتب للطالب ا اختبارات الكترونية ا اختبارات ا حلول ا عروض بوربوينت ا أوراق عمل
منهج انجليزي ا ملخصات وتقارير ا مذكرات وبنوك ا الامتحان النهائي للمدرس

المزيد من مادة
علوم:

التواصل الاجتماعي بحسب الصف الثالث



صفحة المناهج
الإماراتية على
فيسبوك

الرياضيات

اللغة الانجليزية

اللغة العربية

التربية الاسلامية

المواد على تلغرام

المزيد من الملفات بحسب الصف الثالث والمادة علوم في الفصل الثالث

نموذج الإجابة الدليل الذهبي في مراجعة جميع دروس الفصل

1

حل تجميعية تدريبات صفحات الكتاب وفق الهيكل الوزاري

2

مراجعة للاختبار المركزي وفق الهيكل الوزاري

3

الهيكل الوزاري الجديد 2025 منهج بريدج المسار العام

4

الدليل الذهبي في مراجعة جميع دروس الفصل

5

Mock Exam Practice for Grade 3 2024-2025

Mock Exam Practice
Grade 3
Term 3

2024-2025

	Name اسم الطالب
	Class الصف
	School المدرسة
	Subject المادة

Notes:

This exam is a practice

Mock Exam Practice for Grade 3 2024-2025

الدليل الإرشادي للامتحان
Exam Guidelines

ملاحظات Comment	محتوى الامتحان Syllabus	المادة Subject	اليوم والتاريخ Day & Date
Parents are requested to use this mock paper to make their child practice for End of term exam.	Unit-1 Plant life cycle and traits. students will explore the life cycles of plants and the traits they inherit Unit-2 Animal life cycle and traits. students will explore the life cycles of animals, the traits they inherit, and their social interactions	Science Grade 3	

Mock Exam Practice for Grade 3 2024-2025

نماذج الأسئلة
Sample Questions

Question	1
Which of the following is the correct order of the plant life cycle?	
A	Flower → Seedling → Germination → Seed
B	Seed → Germination → Seedling → Pollination → Flower/Seed
C	C. Seedling → Flower → Pollination → Germination

Question	2
Mohammed has planted a mango seed this Summer, in couple of years he might get_____from the tree	
A	Guavas
B	Mangoes
C	Pomegranate

Mock Exam Practice for Grade 3 2024-2025

Question		3
When a seed germinates, it		
A		Reproduces
B		Grows into new plant
C		Will Die

Question		4
Make more of an organism's own kind is known as		
A		Reproduction
B		Germination
C		Pollination

Mock Exam Practice for Grade 3 2024-2025

Question		5
Birds, insects, wind and other animals carry pollens from male part of one flower to female part of another flower. This process is called_____ -		
A		Germination
B		Metamorphosis
C		Pollination

Question		6
What is a variation?		
A		A way plants grow in water
B		A kind of plant
C		A difference in traits among the same species

Mock Exam Practice for Grade 3 2024-2025

Question

7



How do conifers reproduce?

A

Cones

B

Stem

C

Flower

Question

8

Mammals reproduce from two parents and the offspring carries traits from

A

Only mother

B

Only Father

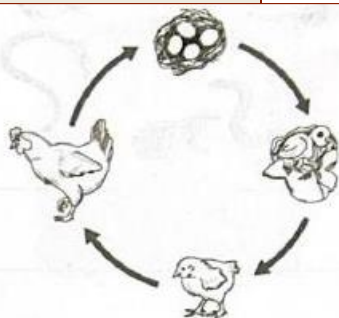
C

Both father and mother.

Mock Exam Practice for Grade 3 2024-2025

Question

9



Which animal undergoes similar lifecycle as of chicken

A

Butterfly

B

Cat

C

Duck

Question

10



Which of the following statement is **NOT** true about mammals

A

They give birth to young ones.

B

They take care of their babies

C

They undergo metamorphosis.

Mock Exam Practice for Grade 3 2024-2025

Question	11
----------	----

What kind of life cycle do insects have?

A	Egg → Tadpole → Adult
B	Egg → Larva → Pupa → Adult
C	Seed → Sprout → Plant

Question	12
----------	----

An amphibian lives on

A	Land
B	Water
C	Both land and water


Question	13
----------	----

The passing of traits from parents to young is

A	Learned Traits
B	heredity
C	offspring

Mock Exam Practice for Grade 3 2024-2025

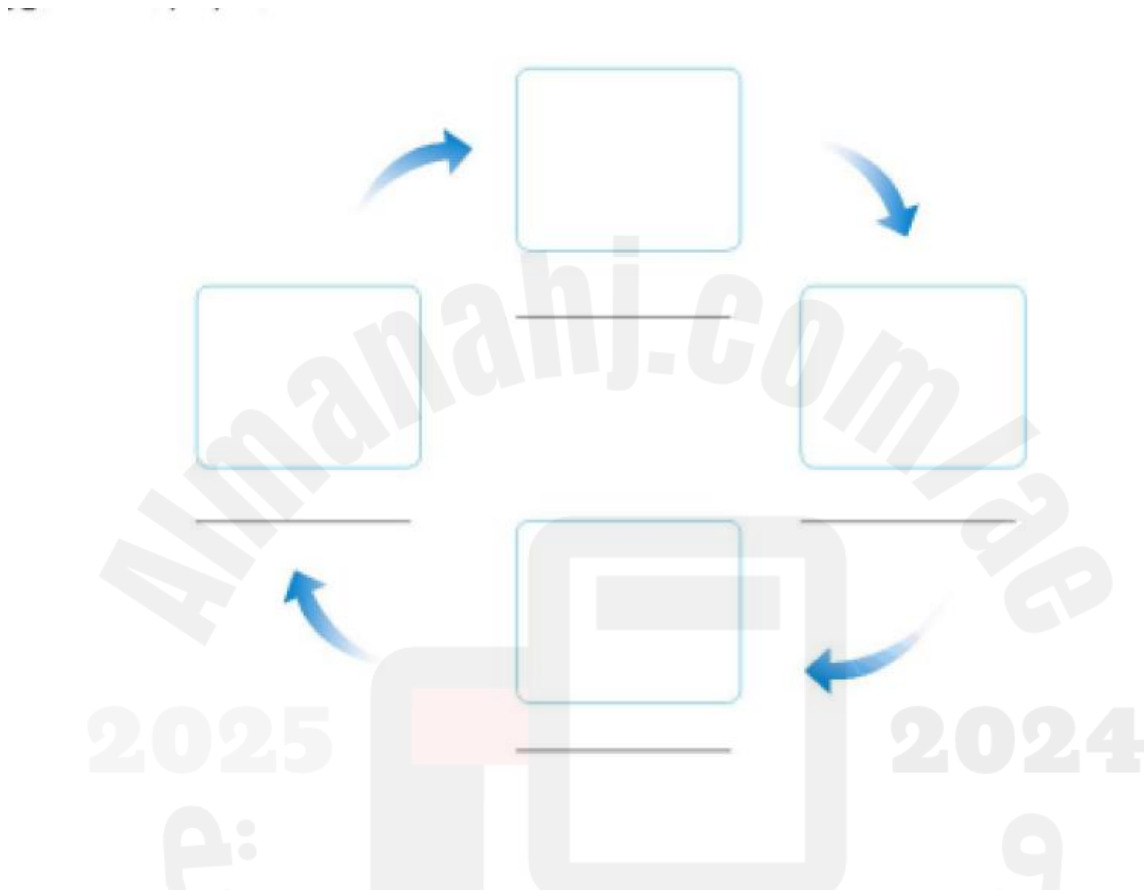
Question		14
What is an example of a learned trait?		
A		A bear hibernating
B		Hatching of an egg
C		A person using a hammer

Question		15
		2024
Birds like to live in group. It helps them to:		
A		To protect themselves from predator.
B		To build nest/ home
C		To fly higher

Mock Exam Practice for Grade 3 2024-2025

16. Complete life cycle of butterfly.

Egg,	Larva,	Pupa,	Adult
------	--------	-------	-------



17. Use the help box to fill in the blank (2*4=8)

Pollination, Reproduce, Lifecycle, Germination
--

1. Make more of an organism's own kind _____
2. Birds, insects and other animals carry pollen from the male part of the flower to the female part _____
3. To grow from a seed to a young plant _____
4. How an organism grows and reproduces _____

Mock Exam Practice for Grade 3 2024-2025

18. Choose True of False.

a) All plants contain their seeds in their fruits only.	True	False
b) Young one of frog is known as tadpole.	True	False
c) Living in group helps to provide better care of young ones.	True	False
d) Different organisms have different lifecycles.	True	False


19.

Use the help box, write the given traits in the correct box.

Eye Color	Reading	Dancing	Hair texture
Inherited trait		Learned trait	

Mock Exam Practice for Grade 3 2024-2025

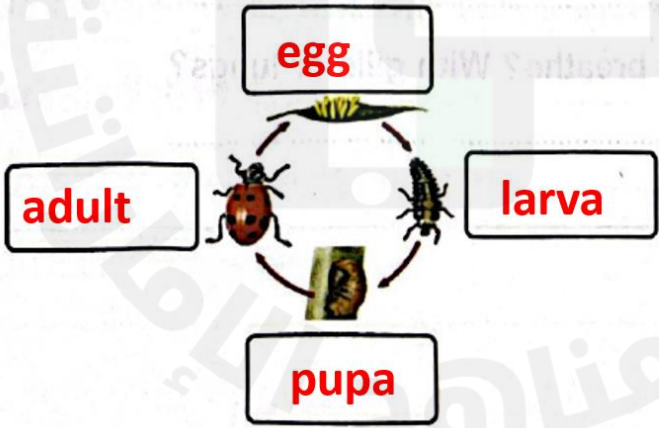
20. The image below shows the stages of seed growth. Draw a line to connect each stage with right description.



Stage	Description
1	The adult makes new seeds
2	A flower forms
3	The seed sprouts
4	The seedling has stem, roots and leaves

Mock Exam Practice for Grade 3 2024-2025

دليل الإجابة
Answer Guidelines

الإجابة Answer	رقم السؤال Item
B	1
B	2
B	3
A	4
C	5
C	6
A	7
C	8
C	9
C	10
B	11
C	12
B	13
C	14
A	15
 <p>Students need not draw the picture, if mentioned in correct order, 2 marks for each labelling.</p>	16
1. Reproduce 2. Pollination 3. Germination 4. Life Cycle (4x2=8)	17

Mock Exam Practice for Grade 3 2024-2025

- a) False
b) True
c) True
d) True

(4x2=8)

18

Inherited trait

Learned trait

19

Eye Color

Reading

Hair texture

Dancing

(4x2= 8)

The image below represents the stages of seed growth activity. Draw a line to connect each stage with its right description in the table below.



Stage
1
2
3
4

Description
The adult makes new seeds
A flower forms
The seed sprouts
The seedling has a stem, roots, and leaves

(4x2 =8)

20

Mock Exam Practice for Grade 3 2024-2025

