

تم تحميل هذا الملف من موقع المناهج الإماراتية



تجميعة اختبارات تدريبية منهج انسابير

موقع المناهج ← المناهج الإماراتية ← الصف الثالث ← علوم ← الفصل الثاني ← اختبارات ← الملف

تاريخ إضافة الملف على موقع المناهج: 15:37:26 2025-03-09

ملفات اكتب للمعلم اكتب للطالب | اختبارات الكترونية | اختبارات | حلول | عروض بوربوينت | أوراق عمل
منهج انجليزي | ملخصات و تقارير | مذكرات و بنوك | الامتحان النهائي للمدرس

المزيد من مادة
علوم:

التواصل الاجتماعي بحسب الصف الثالث



صفحة المناهج
الإماراتية على
فيسبوك

الرياضيات

اللغة الانجليزية

اللغة العربية

التربية الاسلامية

المواد على تلغرام

المزيد من الملفات بحسب الصف الثالث والمادة علوم في الفصل الثاني

أسئلة الامتحان النهائي القسم الورقي منهج انسابير

1

نموذج اختبار تدريبي متبوع بالإجابات منهج انسابير

2

نموذج إجابة أسئلة الامتحان النهائي القسم الورقي منهج بريدج

3

حل أسئلة مراجعة امتحانية اختيار من متعدد

4

أسئلة مراجعة امتحانية اختيار من متعدد

5

END OF TERM EXAM
COVERAGE- TERM 2

2025

2024

END OF TERM EXAM
COVERAGE- TERM 2

LAYOUT OF EXAM

Number of MCQ عدد الأسئلة الموضوعية	15
Marks of MCQ درجة الأسئلة الموضوعية	4
Number of FRQ عدد الأسئلة المقالية	5
Marks per FRQ الدرجات للأسئلة المقالية	6 to 10

MULTIPLE-CHOICE QUESTIONS WILL COME FROM THE FOLLOWING PAGES:

- **UNIT 3**
- **PAGE 54, 55, 57, 67, 83**
- **UNIT 4**
- **PAGES 11, 19, 26, 37, 50, 73**

1. A type of organism that has no living population is said to be:

- A fossil
- B remains
- C extinct



2. What makes up earth's atmosphere?

- A gas
- B dust
- C all of the above



3. Look at the table below. Answer the question

ANIMAL	FEATURE
Saber tooth cat	long, sharp teeth
wooly mammoth	flat teeth
pterodactyl	long wings
triceratops	leathery skin

Which animal was most likely a meat eater?

- A saber tooth cat
- B wooly mammoth
- C triceratops

4. Which statement best describe the SUMMER season

- A short days with less sun
- B Temperatures are cold
- C The sun is high in the sky, with longer days

5. Which statement best describe the WINTER season

- A Suns path is higher
- B Temperatures are cold
- C The sun is high in the sky, with longer days

6. Which statement best describe the SPRING season	
A	short days with less sun
B	there are more days of sunlight
C	The sun is high in the sky, with longer days



8. The line earth revolves around is called	
A	hemisphere
B	axis
C	plot

10. How will sandbags change the effect of water on land?	
A	It will slow down the water
B	it will not do anything
C	it will allow all the water to come onto the land



7. What is a city's climate based on?	
A	how near it is to the sun
B	on its location on earth
C	how far away from the sun it is

9. How can you tell which fossils are the oldest?	
A	the oldest fossil is found in the deepest rock
B	The oldest fossil is the first one found.
C	The oldest fossil is the second fossil found

11. Which structure will help a building withstand an earthquake best?	
A	a tall wooden building
B	a one-story brick building
C	a tall brick building

12. What is a natural hazard that can found in the UAE?

A	blizzard
B	tornado
C	sand storms

14. What can scientist learn from studying a mold fossil of an ancient seashell?

A	shape and size of the shell
B	where it lived
C	all of the above


15. An earthquake/flood/landslide is a natural hazard because:

A	it made the place beautiful
B	it damages property and hurts living things
C	it is caused by humans

13. What might happen if you introduce new plants or animals to an ecosystem?

A	the new plant or animal might not survive
B	It may destroy the ecosystem
C	all of the above

16. What is the temperature in degrees Celsius (C)?



- | | |
|----------|-------------------|
| A | 20 degrees |
| B | 28 degrees |
| C | 30 degrees |

1. What will the temperature in Dallas be?

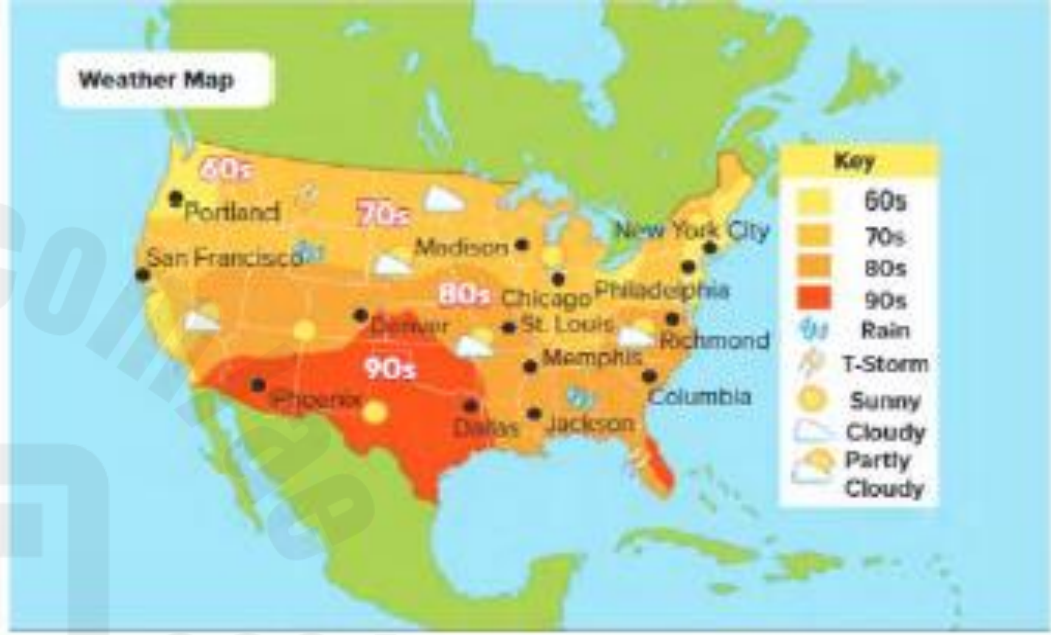
- a) 60s
- b) 70s
- c) 90s

2. What is the forecast for Dallas on Thu

- a) rain
- b) partly cloudy
- c) Sunny

3. On which day will Dallas have rain?

- a) Monday
- b) Friday
- c) Tuesday



Weekly Forecast for Dallas, Texas:

Monday	Tuesday	Wednesday	Thursday	Friday



FORMAL RESPONSE QUESTIONS-

Name four tools that can be used to measure weather

1-RAIN GAUGE _____

2- ANEMOMETER: _____

3. WIND VANE _____

4. THERMOMETER: _____

Why do seasons change over the year?

the earths movement around the sun.

What is climate:


The pattern of weather in a place over a long period of time

How do natural hazards affect the environment?

It can destroy the environment


harm living things

16 What is the temperature in degrees Celsius (C)?



- | | |
|---|------------|
| A | 20 degrees |
| B | 28 degrees |
| C | 30 degrees |

17 What is the temperature in degrees Fahrenheit (F)?



- | | |
|---|------------|
| A | 60 degrees |
| B | 73 degrees |
| C | 80 degrees |



Weekly Forecast for Dallas, Texas:

Monday	Tuesday	Wednesday	Thursday	Friday

- What will the temperature in Dallas be?
 - 60s
 - 70s
 - 90s
- What is the forecast for Dallas on Thursday?
 - rain
 - partly cloudy
 - Sunny
- On which day will Dallas have rain?
 - Monday
 - Friday
 - Tuesday

FORMAL RESPONSE QUESTIONS-

Name four tools that can be used to measure weather

1-RAIN GAUGE

2- ANEMOMETER

3. WIND VANE

4. THERMOMETR

Why do seasons change over the year?

the earths movement around the sun. Accept any variation of this answer

What is climate?

The pattern of weather in a place over a long period of time

How do natural hazards affect the environment?

It can destroy the environment

harm living things

Question 1

What type of organism that has **no living population** is said to be

- | | |
|---|---------|
| A | fossil |
| B | remains |
| C | extinct |

Question 2

Animal	Feature
saber-toothed cat	long, sharp teeth
woolly mammoth	flat teeth
pterodactyl	long wingspan
triceratops	leathery skin

Which animal is most likely a **meat eater** ?

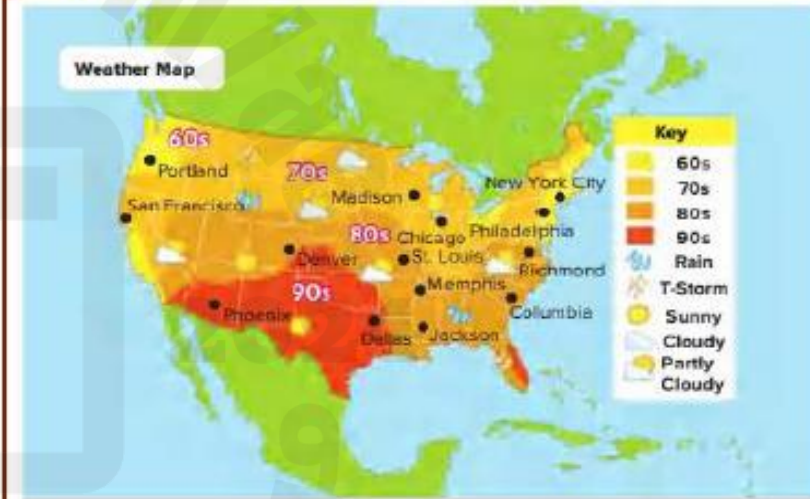
- | | |
|---|-------------------|
| A | saber toothed cat |
| B | woolly mammoth |
| C | triceratops |

Question 3

A **blanket of gases and tiny bits of dust** that surround Earth is

- | | |
|---|-------------|
| A | weather |
| B | atmosphere |
| C | temperature |

Question 4



The weather map predicts that the high temperature in Dallas will be in the

- | | |
|---|------|
| A | 60 s |
| B | 70 s |
| C | 90 s |

Question 5

What is the temperature in **degrees Celsius** (C)?



- | | |
|---|------------|
| A | 75 degrees |
| B | 24 degrees |
| C | 20 degrees |


Question 6

Which statement best describes the **SUMMER** season ?

- | | |
|---|---|
| A | short days with less sun |
| B | The temperatures are cold. |
| C | The sun is high in the sky , with long days . |

Question 7

In which layer would the **YOUNGEST** fossil be found?



- | | |
|---|---|
| A | 1 |
| B | 2 |
| C | 3 |
| D | 4 |

Question 8

What can **scientists learn** from studying a mold fossil of an ancient seashell?

- | | |
|---|-----------------------------|
| A | shape and size of the shell |
| B | where it lived |
| C | all the above |

Question 9

What might happen if you **introduce new plants or animals** to an **ecosystem**?

- | | |
|---|---|
| A | The new plant or animal might not survive . |
| B | It might destroy the ecosystem. |
| C | All the above |

Question 10

What is a **city's climate** based on ?

- | | |
|---|----------------------------|
| A | how near it is to the sun |
| B | how far it is from the sun |
| C | its location on earth |

Question 11

When do we call something a natural disaster?

- | | |
|---|---|
| A | When it happens in nature and changes the environment |
| B | When it made a place beautiful |
| C | When it is caused by humans |

Question 12

Earth has an **imaginary line** called an _____ through its center



- | | |
|---|--------|
| A | angle |
| B | axis |
| C | titled |

Question 13

How will sandbags change the effect of water on land?

- | | |
|---|---|
| A | It will not do anything. |
| B | It will slow down the water . |
| C | It will allow all the water to come onto the land . |

Question 14

What structure will help a building withstand an earthquake best ?

- | | |
|---|----------------------------|
| A | A tall wooden building |
| B | A one-story brick building |
| C | A tall brick building |

Question 15

What is a natural hazard that can be found in the UAE?

- | | |
|---|-----------|
| A | blizzard |
| B | sandstorm |
| C | tornado |

Question 16

Complete the statement with one of the following words

Temperature , precipitation , weather , fossils , climate

1. What the air is like at a certain time and place is called _____
2. Water that falls to the ground from the clouds is called _____
3. Scientists learn about dinosaurs by studying _____
4. _____ is the measure of how hot or cold something is.
5. The pattern of the weather in a certain place over a long period of time is called _____

How is it possible to find old and new fossils in the same area ?



Question 17

The figure below represents the four seasons .
Study it and answer the questions .



A



B



C



D

Which letter represents the hot season ? _____

Which letter represents the fall season ? _____

Which letter represents the season that has the shortest hours of sunlight during the day ? _____

Question 18

The figure below represents three tools used to measure the weather ,write the **name and use** of each tool .









Question 19

Explain two of the 4 seasons .

Why do seasons change over the year?




Spring



Winter



Fall



Summer

Question 20

Explain how do natural hazards affect the environment?

Explain how people can prepare for natural hazards .
