

حل أوراق عمل امتحانية وفق منهج انسباير



تم تحميل هذا الملف من موقع المناهج الإماراتية

موقع المناهج ← المناهج الإماراتية ← الصف الثالث ← علوم ← الفصل الثالث ← ملفات متنوعة ← الملف

تاريخ إضافة الملف على موقع المناهج: 19:56:33 2025-05-08

ملفات اكتب للمعلم اكتب للطالب | اختبارات الكترونية | اختبارات | حلول | عروض بوربوينت | أوراق عمل
منهج انجليزي | ملخصات وتقارير | مذكرات وبنوك | الامتحان النهائي | للمدرس

المزيد من مادة
علوم:

التواصل الاجتماعي بحسب الصف الثالث



صفحة المناهج
الإماراتية على
فيسبوك

الرياضيات

اللغة الانجليزية

اللغة العربية

التربية الاسلامية

المواد على تلغرام

المزيد من الملفات بحسب الصف الثالث والمادة علوم في الفصل الثالث

أوراق عمل امتحانية وفق منهج انسباير	1
أسئلة الاختبار التكويني الأول في دروس تغيرات الحالة والتغيرات الفيزيائية والتغيرات الكيميائية	2
ملخص جميع دروس وحدات الكتاب	3
حل أسئلة مراجعة الوحدة 11 القياس	4
أسئلة مراجعة الوحدة 11 القياس	5

Test Practice May 2025

1) Traits that come from parents are called...

A	Inherited traits
B	Variation traits
C	Adaptation traits

2) Mammals reproduce from two parents and the offspring have...

A	The same traits as the father
B	The same traits as the mother
C	Traits from both parents

3) Look at the table. Which of the following traits best fits in the empty box?

Inherited Traits	
flower color	stem height
seed shape	leaf shape
	taste of fruit

A	Dry leaves
B	Type of root
C	Number of blooms

4) Which of the following is **not a stage** of a Tigers' life cycle?

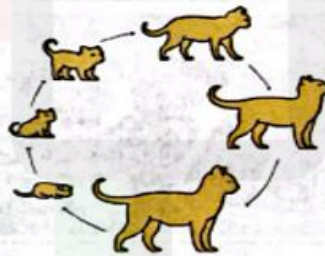
- | | |
|---|--------------|
| A | Reproduction |
| B | Flying |
| C | Growth |

5) Which of the following animals goes through metamorphosis?



- | | |
|---|------|
| A | Dog |
| B | Cat |
| C | Frog |

6) Which of the following animals goes through a life cycle similar to the cat's life cycle shown below?




- | | |
|---|-----------|
| A | Butterfly |
| B | Dog |
| C | Turtle |

7) Amphibians are animals that live...

- | | |
|---|----------------------|
| A | On land only |
| B | In water only |
| C | On land and in water |

8) The image shows some mammals. Mammals are animals that...



- | | |
|---|--------------------------------|
| A | Are giving birth to live young |
| B | Are hatched from eggs |
| C | Are reproduced through budding |

9) Which animal goes through a life cycle **SIMILAR** to the stages of a chicken's life cycle?



- | | |
|---|-----------|
| A | Butterfly |
| B | Cat |
| C | Duck |

10) The images below shows some mammals. Which of the following statements about mammals is **TRUE**?



- | | |
|---|-----------------------------|
| A | They lay eggs |
| B | They look after their young |
| C | They undergo metamorphosis |

PART 2: Fill in your answers in the blank spaces.

11)

The adjacent figure represents the frog life cycle.


- Explain why frogs are considered amphibians?

They live in water and on land.

- Which number represents the Tadpole stage?
- How do Tadpoles breathe? With gills or lungs?

2

With gills



12) The figure represents two pea plants with different flower colors.

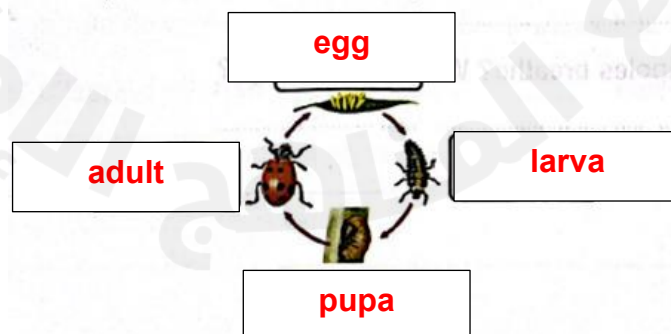
The figure below represents two pea plants with different flower color.



- If two plants with purple flowers reproduced, the offspring will have **purple** flowers.
- If two plants with white flowers reproduced, the offspring will have **white** flowers.
- If plants with purple flowers reproduced with plants with white flowers, the first generation of offspring will have **purple** flowers and the second generation of offspring will have **purple** and **white** flowers.

13) The figure below represents an insect life cycle. Label each stage using one of the following terms:

Larva ---egg --- pupa --- adult



14) Look at the pictures and answer the questions that follow. .



A



B



C

- Which letter represents a plant that has thorns to protect itself?

B and C

- Which letter represents a plant that has red flowers?

B

- Which letter represents a plant that has a fruit that is yellow?

C

- Which letter represents a fruit that has green colour?

A